

WJEC
INTERMEDIATE TIER
REVISION BOOK
SJHS

SJHS

Contents:

1. Angles pg.	3-8
2. Probability pg.	9-14
3. Using known facts pg.	15-17
4. Sequences pg.	18-20
5. Quadratic graphs pg.	21-26
6. Standard form pg.	27-28
7. Simultaneous equations pg.	29-31
8. Expanding brackets pg.	32-33
9. Reverse perimeter, area and volume pg.	34-42
10. Trial and improvement pg.	43-45
11. Trigonometry pg.	46-48
12. Decimals pg.	49-52
13. Simplifying expressions and substitution pg.	53-55
14. Constructions pg.	56-58
15. Factorising pg.	59-61
16. Inequalities pg.	62-64
17. Transformations pg.	65-72
18. Venn diagrams pg.	73-75
19. Function machines pg.	76-77
20. Index laws pg.	78-78
21. Straight line graphs pg.	79-81
22. Relative frequency pg.	82-83
23. Circle Theorems pg.	84-86
24. Percentages pg.	87-90
25. MMR pg.	91-92
26. Pythagoras theorem pg.	93-94
27. Tree diagrams pg.	95-97

WJEC INTERMEDIATE TIER ANGLES WORKSHEET

A regular polygon has exterior angles of 45° .

- (a) How many sides does this polygon have? [2]

.....

.....

.....

$ABCD$ is a quadrilateral.

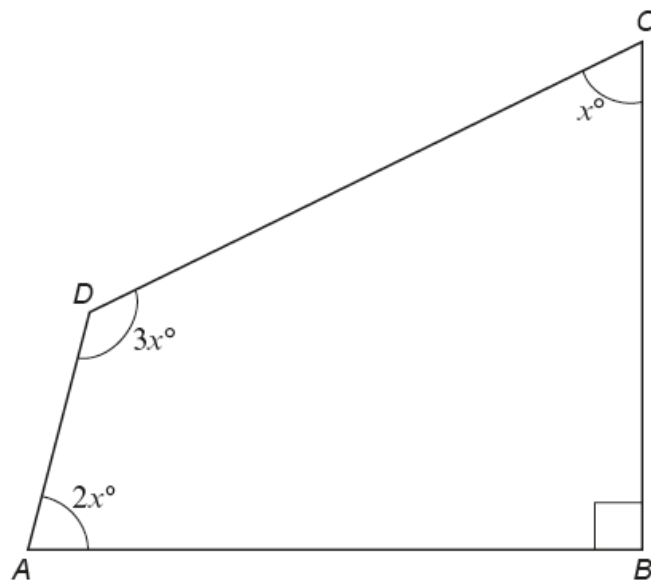


Diagram not drawn to scale

- (a) Calculate the value of x . [4]

.....

.....

.....

.....

- (b) When $ABCD$ is drawn to scale, would the lines AD and BC be parallel or not? You must justify your answer without using a scale drawing. [2]

.....

.....

.....

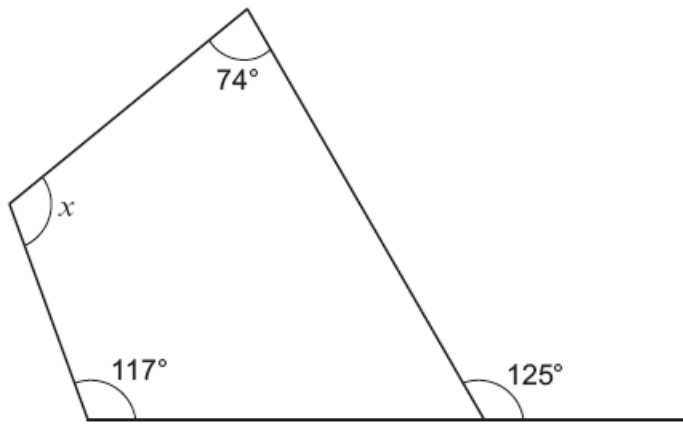


Diagram not drawn to scale

Find the size of angle x .

[3]

.....

.....

.....

.....

.....

$x = \text{.....}^\circ$

$ABCDE$ is a regular pentagon with centre O .

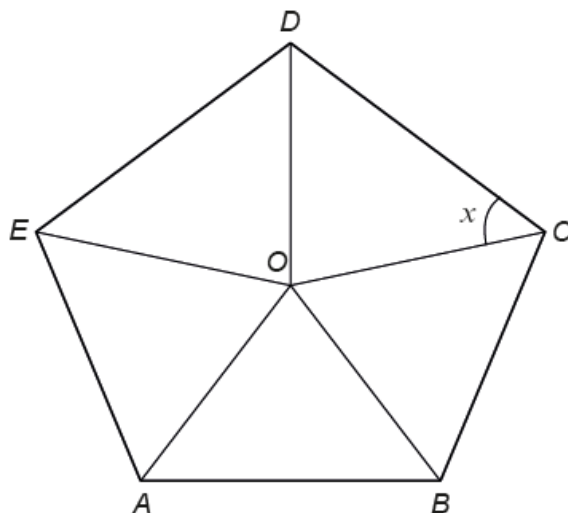


Diagram not drawn to scale

Calculate the size of angle x .
You must show all your working.

[4]

.....

.....

.....

.....

.....

.....

.....

.....

.....

.....

.....

.....

Show that the triangle below is **not** a right-angled triangle.

[5]

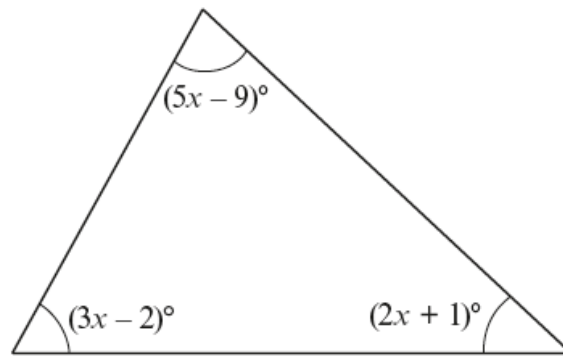


Diagram not drawn to scale

.....

.....

.....

.....

.....

.....

.....

.....

.....

.....

ABC is an isosceles triangle with $AB = AC$.

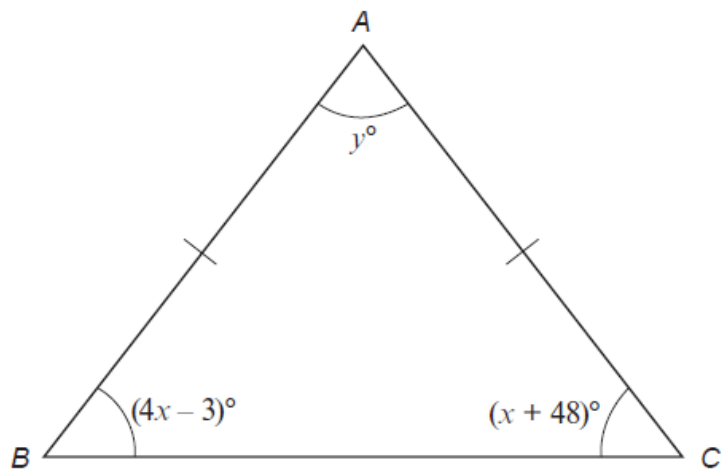


Diagram not drawn to scale

Calculate the value of y .

[6]

.....

.....

.....

.....

.....

.....

.....

.....

.....

.....

.....

.....

Three red cards have the following numbers written on them.



Four green cards have the following numbers written on them.



In a game, the cards are turned face down.
A player chooses one red card and one green card at random.
The player's score is the sum of the two numbers.

In a game, the cards are turned face down.
A player chooses one red card and one green card at random.
The player's score is the sum of the two numbers.

(a) Complete the following table.

[1]

		Score			
Red card	9	11
	6	8
	3	4	5	6	7
		1	2	3	4
		Green card			

(b) A player wins a prize if the score is **more than 9**.
Safira plays the game once. What is the probability that she wins a prize?

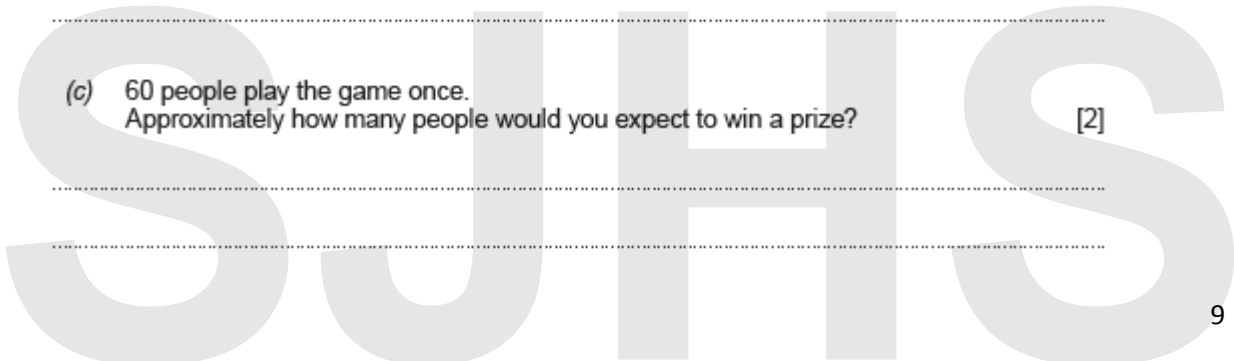
[2]

.....
.....

(c) 60 people play the game once.
Approximately how many people would you expect to win a prize?

[2]

.....
.....



10. Ceri has a set of cards.
Each of her cards is labelled North, East, South or West.

- (a) Ceri chooses one card at random from her set of cards.
Complete the table below to find the probability of Ceri choosing a card labelled West. [2]

Label	North	East	South	West
Probability	0.4	0.25	0.2	

.....

.....

.....

- (b) Ceri chooses one card at random from her set of cards.
What is the probability that the card is labelled East or South? [2]

.....

.....

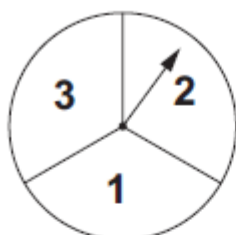
- (c) Sasha has an identical set of cards.
Ceri and Sasha each choose one card at random from their set of cards.
What is the probability that they both choose a card labelled North? [2]

.....

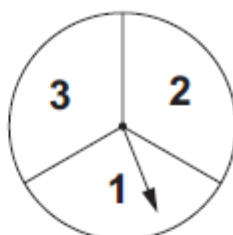
.....

Sara is in charge of a game at her school's Christmas party.

Two fair spinners are spun as shown in the example below.



1st Spinner



2nd Spinner

People can make a two-digit number using the numbers shown on the spinners using the following rule:

Multiply the number on the first spinner by 10 and then add the number on the second spinner.

One example, as shown above, makes the number 21, because $2 \times 10 + 1 = 21$.

- (a) How many different numbers can be made playing this game? [1]

.....
.....
.....

- (b) Write down all the prime numbers that can be made playing this game. [2]

.....
.....
.....

- (c) What is the probability that a person makes a prime number when playing the game once? [2]

.....
.....

- (a) A fair, six-sided dice is rolled.
What is the probability that a 4 is shown on the dice?
Circle your answer.

[1]

6%

$\frac{1}{5}$

$\frac{1}{4}$

6:1

$\frac{1}{6}$

- (b) 50 raffle tickets were sold at a charity event.
Sian has a 20% chance of winning the top prize.
How many tickets did Sian buy?
Circle your answer.

[1]

1

2

4

10

20

- (c) A bag contains a mixture of blue beads, yellow beads and pink beads.
One bead is taken at random from the bag.

The probability that the bead is pink is $\frac{1}{5}$.

Which of the following sets of beads could have been in the bag?
Circle your answer.

[1]



A fair six-sided dice and a fair coin are thrown together once.

Circle the correct answer for each of the following statements.

(a) The number of possible outcomes is [1]

2 6 8 12 24.

(b) The probability of getting a 4 on the dice and a tail on the coin is [1]

$\frac{1}{8}$ $\frac{1}{12}$ $\frac{1}{2}$ $\frac{1}{6}$ $\frac{1}{24}$.

(c) The probability of getting a multiple of 3 on the dice and a head on the coin is [1]

$\frac{1}{8}$ $\frac{1}{12}$ $\frac{1}{2}$ $\frac{1}{6}$ $\frac{1}{24}$.

Space for working:

.....

.....

.....

.....

.....

.....

.....

.....

.....

.....

7. The following cards spell out the name Ystradgynlais.



In an experiment, the cards are turned face down and rearranged. A card is selected at random and the letter on the card is recorded.

The experiment is carried out 325 times.

How many times would you expect the letter **Y** to be recorded? [3]

.....

.....

.....

.....

.....

.....

.....

WJEC INTERMEDIATE TIER USING KNOWN FACTS WORKSHEET

(a) Estimate the value of $\frac{41.3 \times 29.6}{198.7}$.

You must show all your working.

[2]

.....

.....

.....

.....

.....

(b) Given that $54 \times 84.2 = 4546.8$, write down the exact value of each of the following.

(i) $540 \times 842 = \dots\dots\dots$

[1]

(ii) $\frac{4546.8}{5.4} = \dots\dots\dots$

[1]

(iii) $\frac{454.68}{84.2} = \dots\dots\dots$

[1]

A whole number is written on a card.

You are given three clues to help you work out the number on the card.

Clue 1 : **Double** the number is between 8 and 18 inclusive.

Clue 2 : The number is a prime number.

Clue 3 : The number is **not** a factor of 100.

What is the number on the card?
You must show all your working.

[3]

.....

.....

.....

.....

.....

.....

.....

.....

.....

.....

The number on the card is

A fraction is written as $\frac{a}{b}$.

- The fraction is a multiple of 0.2.
- The fraction is greater than $\frac{1}{2}$.
- The fraction is less than 75%.

Write down the fraction as $\frac{a}{b}$, where a and b are whole numbers.

[3]

.....

.....

.....

.....

.....

.....

.....

Answer =

Look at the following descriptions of special quadrilateral shapes.
Circle the correct name for each one.

- (a) Its diagonals intersect at 90° .
Only one diagonal is a line of symmetry. [1]

Kite Rhombus Square Trapezium Rectangle

- (b) Only one pair of sides are parallel. [1]

Kite Rhombus Square Trapezium Rectangle

- (c) All four sides are equal.
Its diagonals are not equal in length. [1]

Kite Rhombus Square Trapezium Rectangle

WJEC INTERMEDIATE TIER SEQUENCES WORKSHEET

(a) Write down the next two numbers in the following sequence. [2]

33 26 19 12

.....
.....

(a) Write down the next two numbers in the following sequence. [2]

35, 25, 16, 8, ,

.....
.....

(a) Write down the next two numbers in the following sequence. [2]

22 21 18 13

.....
.....

(a) Write down the n th term of the following sequence. [2]

3, 4, 5, 6,

.....
.....
.....
.....

(b) The n th term of a different sequence is given by $n^2 + 7$.

(i) Write down the first three terms of this sequence. [2]

.....
.....
.....

1st term = 2nd term = 3rd term =

(ii) Which term in this sequence is the first that has a value greater than 85? [2]

.....
.....
.....
.....

Answer = term.


(a) Write down the first three terms of the sequence whose n th term is given by $2n - 5$. [2]

.....
.....
.....
.....

The first three terms are, and

(b) Write down an expression for the n th term of the following sequence. [2]

7, 11, 15, 19, ...



(b) Write down the n th term of the following sequence.

[2]

3, 6, 11, 18, 27, ...

.....

.....

.....

.....

.....

WJEC INTERMEDIATE TIER QUADRATIC GRAPHS WORKSHEET

11. (a) The table below shows some of the values of $y = 2x^2 - 5x - 1$ for values of x from -2 to 4 .

Complete the table by finding the value of y for $x = -1$ and for $x = 2$.

[2]

x	-2	-1	0	1	2	3	4
$y = 2x^2 - 5x - 1$	17		-1	-4		2	11

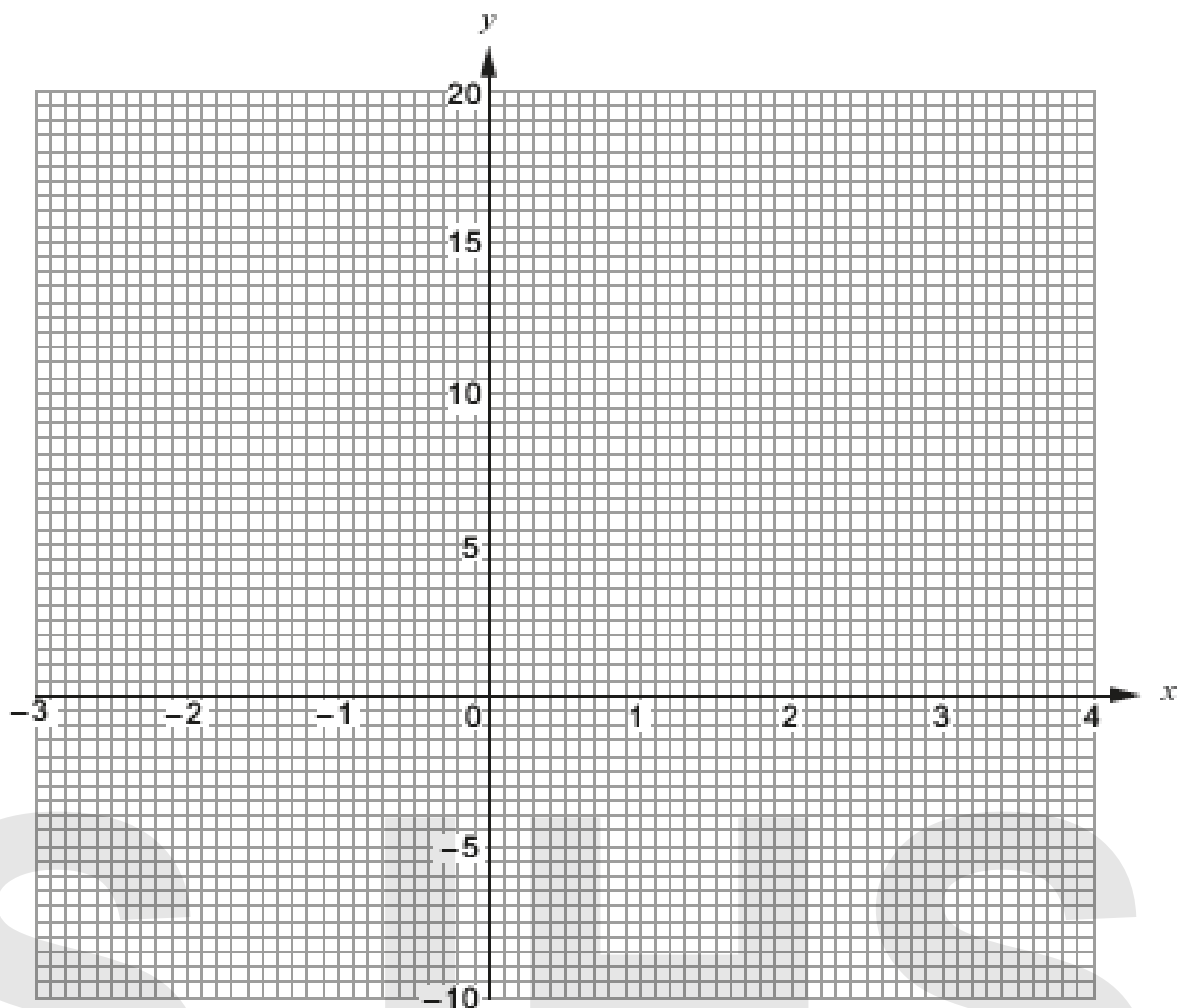
.....

.....

.....

- (b) On the graph paper below, draw the graph of $y = 2x^2 - 5x - 1$ for values of x from -2 to 4 .

[2]



(c) Draw the line $y = 5$ on the graph paper.

Write down the values of x where the line $y = 5$ cuts the curve $y = 2x^2 - 5x - 1$.
Give your answers correct to 1 decimal place. [2]

Values of x are and

(d) Circle the equation below whose solutions are the values you have given in (c). [1]

$$2x^2 - 5x - 1 = 0$$

$$2x^2 - 5x - 6 = 0$$

$$2x^2 - 5x - 5 = 0$$

$$2x^2 - x - 1 = 0$$

$$2x^2 - 5x + 4 = 0$$

.....

.....

.....

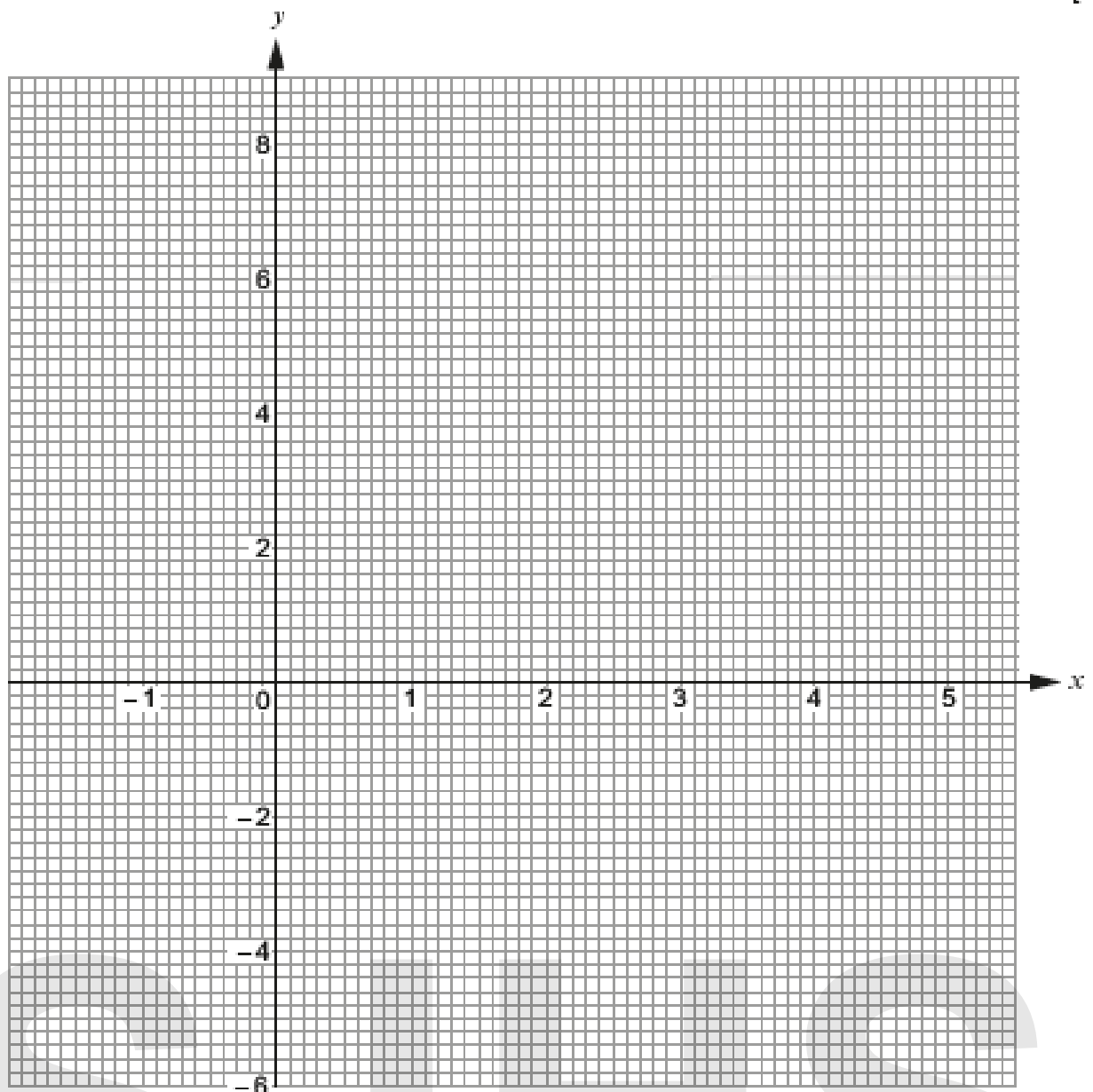
11. The table below shows some of the values of $y = x^2 - 5x + 2$, for values of x from -1 to 5 .

x	-1	0	1	2	3	4	5
$y = x^2 - 5x + 2$	8	2	-2	-4		-2	2

(a) Complete the table above. [1]

.....

(b) On the graph paper below, draw the graph of $y = x^2 - 5x + 2$ for values of x from -1 to 5 . [2]



(c) Draw the line $y = -3$ on the graph paper.

Write down the values of x where the line $y = -3$ cuts the curve $y = x^2 - 5x + 2$.
Give your answers correct to 1 decimal place.

[2]


Values of x are and

- (a) Complete the table below,
 Draw the graph of $y = 2x^2 - 5$ for values of x between -2 and 3 .
 Use the graph paper below.
 Choose a suitable scale for the y -axis.

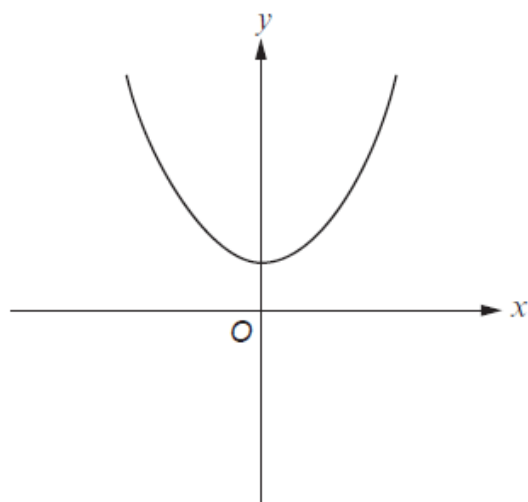
[4]

x	-2	-1	0	1	2	3
$y = 2x^2 - 5$	3		-5	-3	3	13

.....



(b)



The sketch above can represent only one of the equations given below.
Circle this equation.

[1]

$y = x^2$

$y = x^2 - 3$

$y = -x^2$

$y = x^2 + 3$

$y = 3x$

WJEC INTERMEDIATE TIER STANDARD FORM WORKSHEET

Find, in standard form, the value of each of the following.

(a) $\frac{7.5 \times 10^6}{5000}$ [2]

.....
.....
.....
.....

(b) $(2.3 \times 10^3) + (6.4 \times 10^4)$ [2]

.....
.....
.....
.....

Calculate the value of $(5.41 \times 10^5) + (2.3 \times 10^4)$.
Give your answer in standard form. [2]

.....
.....
.....
.....

(a) Express 0.00042 in standard form. [1]

.....

(b) Calculate the value of $\frac{7.2 \times 10^6}{2 \times 10^{-2}}$.
Give your answer in standard form. [1]

.....

.....

(c) Calculate the value of $(4.7 \times 10^5) - (6.2 \times 10^4)$.
Give your answer in standard form. [2]

.....

.....

.....

.....

WJEC INTERMEDIATE TIER EXPANDING BRACKETS WORKSHEET

Circle the correct answer for each of the following.

(a) $x^3 \times x^6 =$ [1]

x^{36} $x^{0.5}$ x^2 x^9 x^{18}

.....

(b) $(7x - 5y) - (3x + 2y) =$ [1]

$4x - 3y$ $4x - 7y$ $4x + 3y$ $-4x + 7y$ $-4x - 7y$

.....

.....

(c) A car travels x miles in 30 minutes.
Its average speed in miles per hour is [1]

$\frac{x}{2}$ $\frac{x}{30}$ $2x$ $\frac{2}{x}$ $30x$

.....

.....

(a) Factorise $x^3 - 5x$. [1]

.....

(b) Expand and simplify $(2x - 3)(x + 4)$. [2]

.....

.....

.....

(c) Factorise $x^2 - 3x - 28$. [2]

.....

.....

(a) Write down the next two numbers in the following sequence. [2]

22 21 18 13

.....
.....

(b) Expand $5(3x - 2)$. [1]

.....

(c) Solve $9x + 3 = 4x + 5$. [3]

.....
.....
.....
.....
.....

In this question, you will be assessed on the quality of your organisation, communication and accuracy in writing.

A right-angled triangle BCD is joined to a rectangle $ABDE$, as shown below.

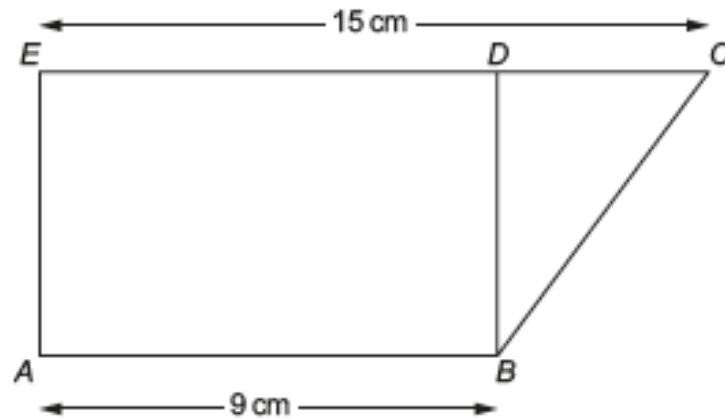


Diagram not drawn to scale

The area of the rectangle is 45 cm^2 .

Calculate the area of the right-angled triangle.
You must show your working.

[5 + 2 OCW]

.....

.....

.....

.....

.....

.....

.....

.....

.....

.....

.....

.....

In this question, you will be assessed on the quality of your organisation, communication and accuracy in writing.

In the diagram below,

- $ABCD$ is a rectangle, and
- PQ is parallel to AD .

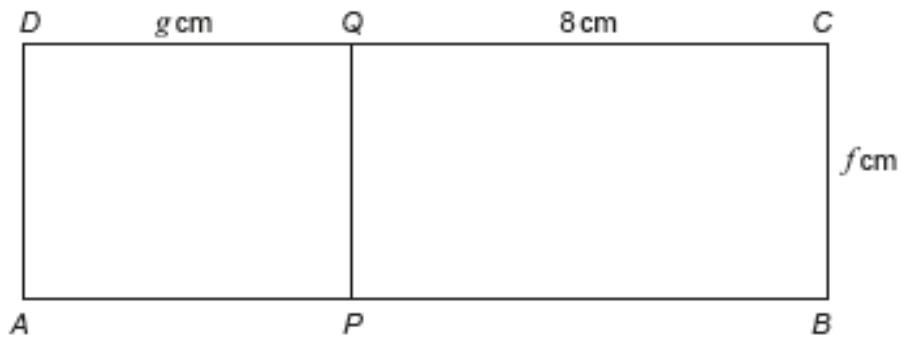


Diagram not drawn to scale

The area of $ABCD$ is 52 cm^2 .
The area of $APQD$ is 20 cm^2 .

Calculate the values of f and g .
You must show all your working.

[5 + 2 OCW]

.....

.....

.....

.....

.....

.....

.....

.....

.....

.....

.....

.....

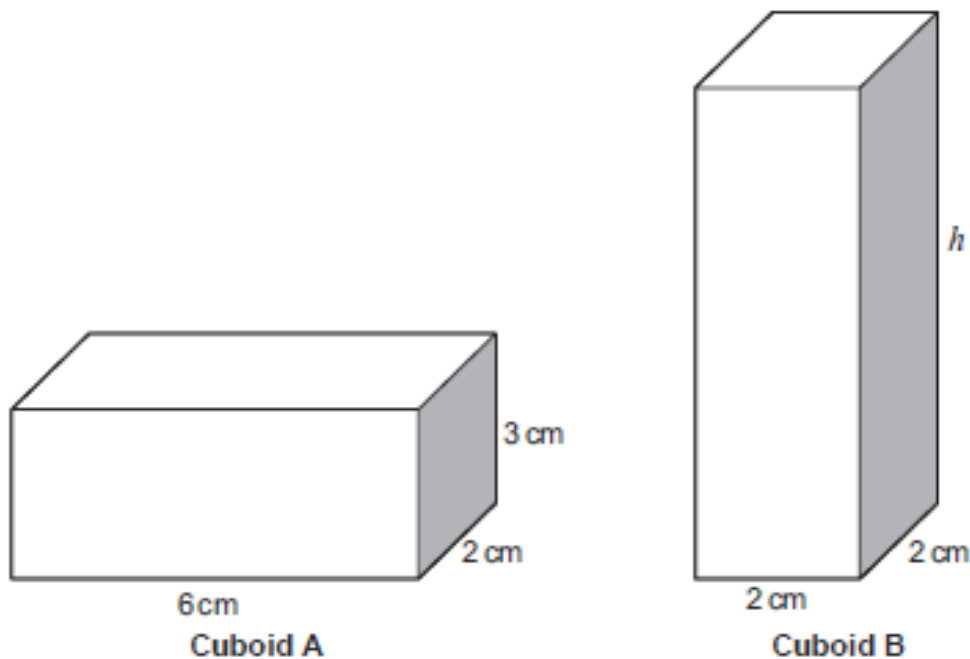
.....

.....

.....

- (a) In this part of the question, you will be assessed on the quality of your organisation, communication and accuracy in writing.

The two cuboids shown below have equal volumes.



Diagrams not drawn to scale

Calculate the height h of Cuboid B.
You must show all your working.

[4 + 2 OCW]

.....

.....

.....

.....

.....

.....

.....

- (b) How many cubic centimetres (cm^3) are there in 2.5 litres?

[1]

.....

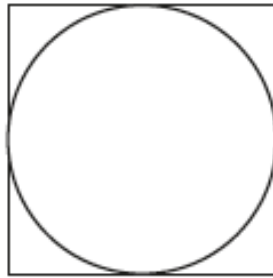
.....

.....

SJHS

In this question, you will be assessed on the quality of your organisation, communication and accuracy in writing.

A square has a perimeter of 80 cm.
A circle fits exactly inside the square, as shown in the diagram.



Calculate the circumference of the circle.
Give your answer correct to 1 decimal place.
You must show your working.

[4 + 2 OCW]

.....

.....

.....

.....

.....

.....

.....

.....

.....

.....

In this question, you will be assessed on the quality of your organisation, communication and accuracy in writing.

*ABCF is a rectangle.
CDEF is a trapezium.
BD is a straight line.*

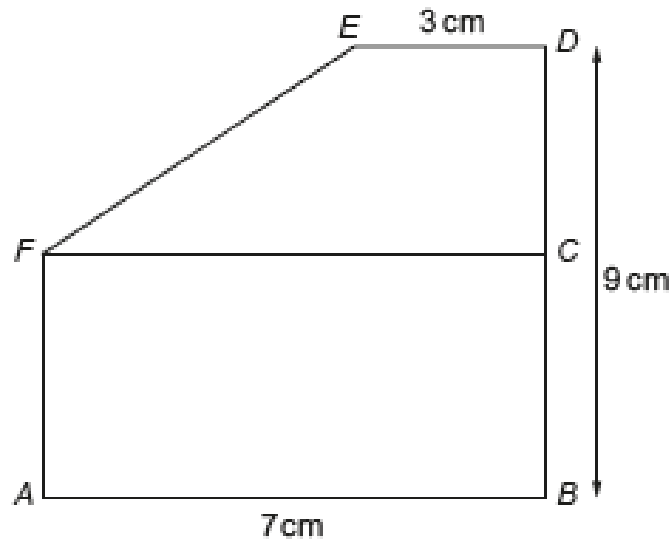


Diagram not drawn to scale

$AB = 7\text{ cm}$, $BD = 9\text{ cm}$ and $DE = 3\text{ cm}$.

The perimeter of rectangle $ABCF$ is 24 cm .

Calculate the area of the trapezium $CDEF$.

You must show all your working.

[4 + 2 OCW]

.....

.....

.....

.....

.....

.....

.....

.....

.....

The area of triangle ABD , shown in the diagram below, is 35 cm^2 .
 $AD = 5 \text{ cm}$ and $BC = 32 \text{ cm}$.
 D is on the line AC , and BD is perpendicular to AC .

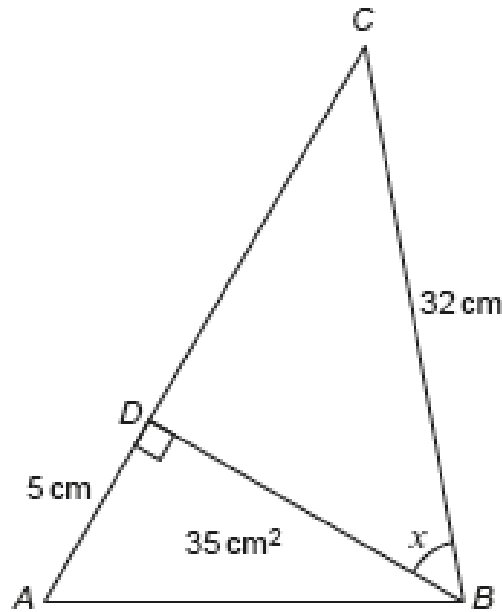


Diagram not drawn to scale

Calculate the size of angle x .
You must show all your working.

[5]

.....

.....

.....

.....

.....

.....

.....

.....

.....

.....

.....

.....

.....

.....

.....

.....

.....

.....

.....

.....

.....

.....

.....

Calculate the area of the trapezium shown below.
You must give the units of your answer.

[3]

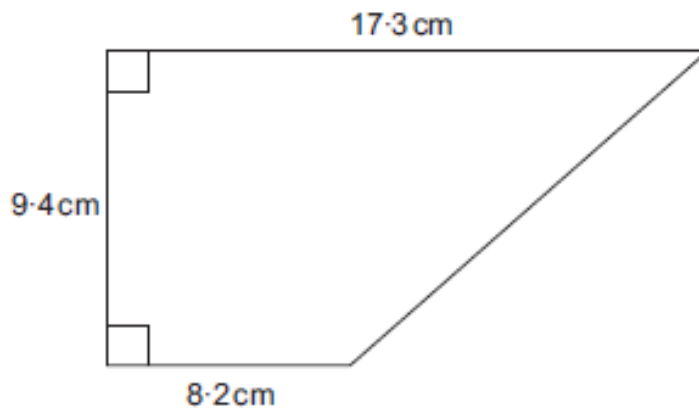


Diagram not drawn to scale

.....

.....

.....

.....

.....

.....

.....

.....

In this question, you will be assessed on the quality of your organisation, communication and accuracy in writing.

AB is the diameter of a circle, centre O , with radius $OA = 4.2$ cm.
 $ABCD$ is a square.

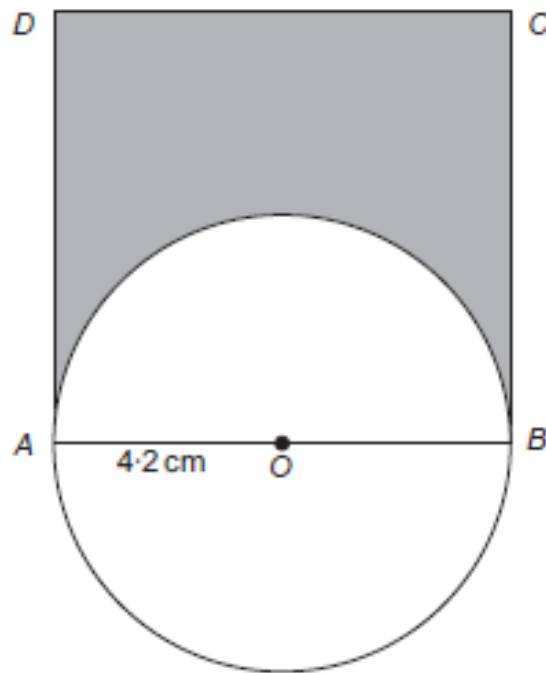


Diagram not drawn to scale

Calculate the area of the shaded region.
You must show all your working.

[5 + 2 OCW]

.....

.....

.....

.....

.....

.....

.....

.....

.....

.....

A triangular prism of length 2 metres is shown below.

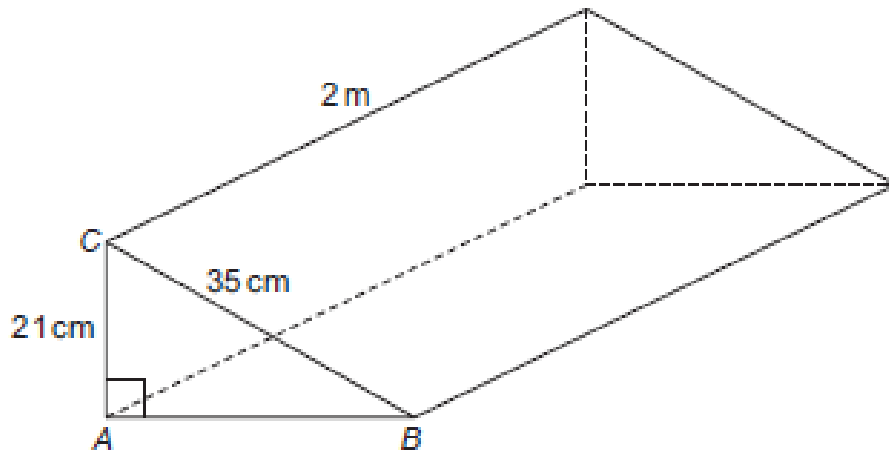


Diagram not drawn to scale

$AC = 21 \text{ cm}$, $BC = 35 \text{ cm}$ and $\hat{BAC} = 90^\circ$.

- (a) Calculate the area of triangle ABC .
Give your answer in cm^2 .
You must show all your working.

[5]

.....

.....

.....

.....

.....

.....

.....

.....

.....

A solution to the equation

$$2x^3 - 3x - 17 = 0$$

lies between 2 and 3.

Use the method of trial and improvement to find this solution correct to 1 decimal place.
You must show all your working.

[4]

.....

.....

.....

.....

.....

.....

.....

.....

.....

.....

.....

.....

.....

.....

.....

.....

.....

.....

.....

.....

.....

.....

.....

.....

.....

.....

. A solution to the equation

$$x^3 - 2x - 45 = 0$$

lies between 3 and 4.

Use the method of trial and improvement to find this solution correct to 1 decimal place.
You must show all your working.

[4]

.....

.....

.....

.....

.....

.....

.....

.....

.....

.....

.....

.....

.....

.....

.....

.....

.....

.....

.....

.....

.....

.....

.....

.....

.....

.....

.....

.....

A solution of the equation

$$x^3 + 2x = 91$$

lies between 4 and 5.

Use the method of trial and improvement to find this solution correct to 1 decimal place.
You must show all your working.

[4]

.....

.....

.....

.....

.....

.....

.....

.....

.....

.....

.....

.....

.....

.....

.....

.....

.....

.....

.....

.....

.....

.....

.....

.....

.....

Calculate the length of the side QR in the triangle PQR shown below.

[3]

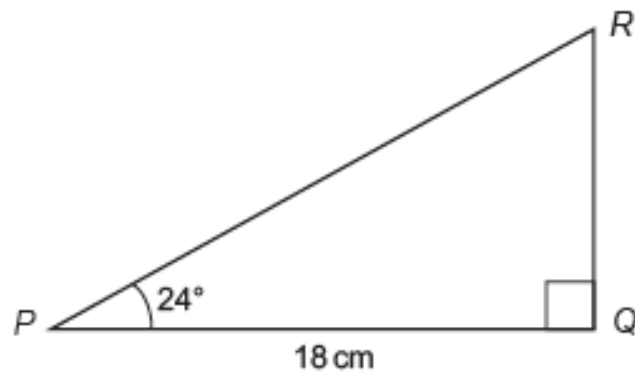


Diagram not drawn to scale

.....

.....

.....

.....

.....

.....

.....

.....

.....

.....

The area of triangle ABD , shown in the diagram below, is 35 cm^2 .

$AD = 5 \text{ cm}$ and $BC = 32 \text{ cm}$.

D is on the line AC , and BD is perpendicular to AC .

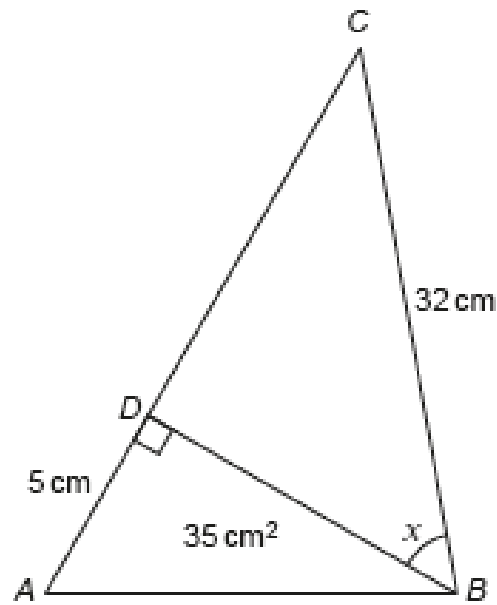


Diagram not drawn to scale

Calculate the size of angle x .

You must show all your working.

[5]

.....

.....

.....

.....

.....

.....

.....

.....

.....

.....

.....

.....

.....

.....

The diagram shows two right-angled triangles, joined together along a common side.

$\hat{S}PQ = 90^\circ$, $\hat{S}QR = 90^\circ$, $\hat{S}QP = 38^\circ$, $PS = 8 \text{ cm}$ and $QR = 15 \text{ cm}$.

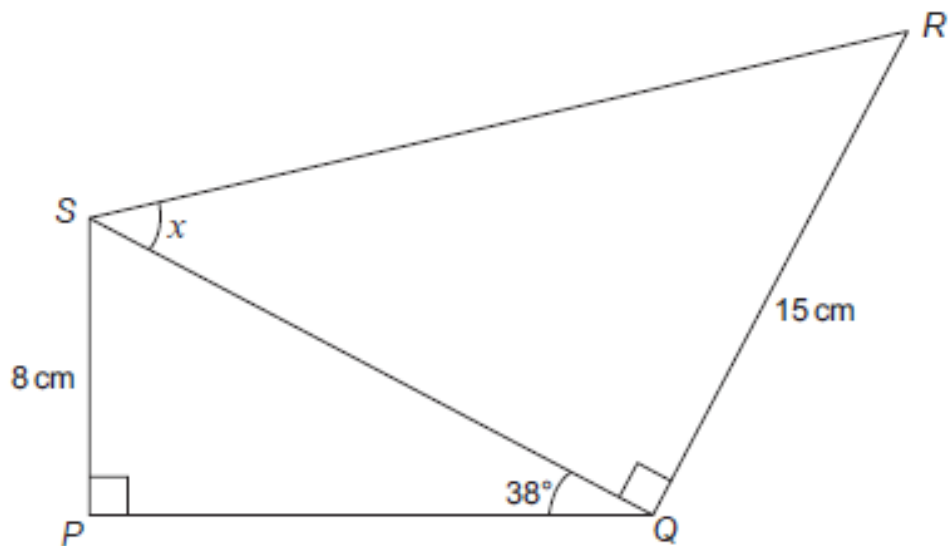


Diagram not drawn to scale

Calculate the size of angle x .

[6]

.....

.....

.....

.....

.....

.....

.....

.....

.....

.....

WJEC INTERMEDIATE TIER DECIMALS WORKSHEET

Calculate each of the following.

(a) 0.4×0.7

[1]

.....
.....

(b) $13.8 - 7.45$

[1]

.....
.....
.....

(c) $3^3 - 2^4$

[2]

.....
.....

(d) $\frac{9}{10} - \frac{3}{5}$

[2]

.....
.....
.....

SJHS

Calculate each of the following.

(a) $3^4 \times 10^3$ [2]

.....
.....

(b) $\frac{1}{0.5}$ [1]

.....
.....

(c) $5.6 - 3.82$ [1]

.....
.....
.....
.....

(d) $\frac{5}{6} - \frac{2}{3}$ [2]

.....
.....
.....
.....

(e) 0.2×0.3 [1]

.....
.....
.....

(a) Calculate 39% of £576. [2]

.....

.....

.....

(b) Calculate $\frac{3}{7}$ of 100.
Give your answer correct to the nearest whole number. [2]

.....

.....

.....

(c) How many quarters are there in 10? [1]

.....

.....

(d) What fraction is equal to 50% of $\frac{1}{6}$? [1]

.....

.....

(e) Circle the fraction that is a recurring decimal. [1]

$$\frac{21}{35}$$

$$\frac{10}{12}$$

$$\frac{17}{68}$$

$$\frac{15}{24}$$

$$\frac{51}{170}$$

.....

.....

.....

WJEC INTERMEDIATE TIER SIMPLIFYING WORKSHEET

(a) Write down the next two numbers in the following sequence. [2]

33 26 19 12

.....
.....

(b) Simplify the expression $10g - 5f - 3g + 3f$. [2]

.....

(c) Using the formula $2T = M + 3K$, find the value of K when $T = 11$ and $M = 4$. [2]

.....
.....
.....
.....

(a) Write down the next two numbers in the following sequence. [2]

35, 25, 16, 8, ,

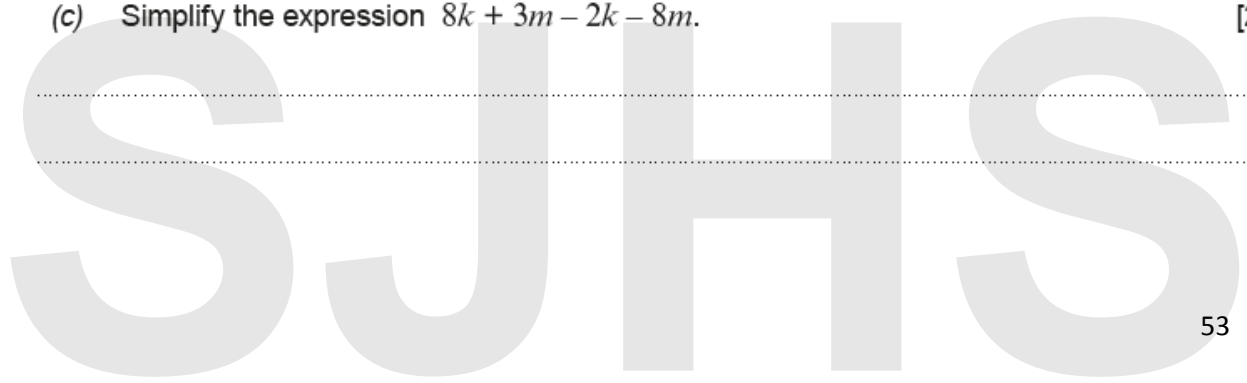
.....
.....

(b) Find the value of $2x + 7y$ when $x = -3$ and $y = 10$. [2]

.....
.....
.....

(c) Simplify the expression $8k + 3m - 2k - 8m$. [2]

.....
.....



Circle the correct answer for each of the following.

(a) $x^3 \times x^6 =$ [1]

x^{36}

$x^{0.5}$

x^2

x^9

x^{18}

(b) $(7x - 5y) - (3x + 2y) =$ [1]

$4x - 3y$

$4x - 7y$

$4x + 3y$

$-4x + 7y$

$-4x - 7y$

(c) A car travels x miles in 30 minutes.
Its average speed in miles per hour is [1]

$\frac{x}{2}$

$\frac{x}{30}$

$2x$

$\frac{2}{x}$

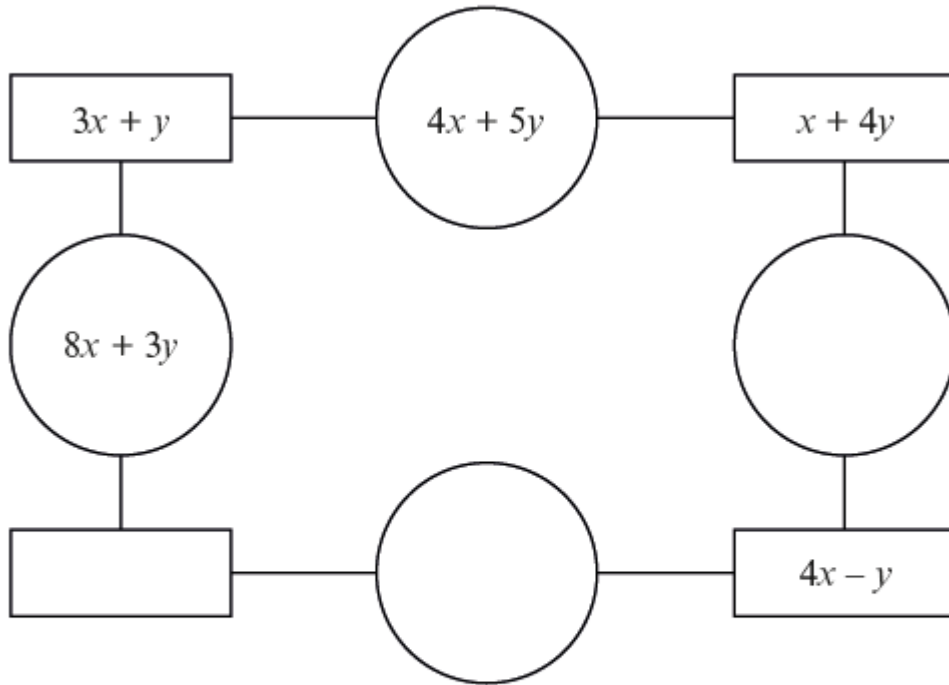
$30x$

Look at the diagram below.

The expression in each circle is found by **adding** the expressions in the rectangles on either side of the circle.

Complete the diagram by writing expressions in the blank circles and the blank rectangle. You must simplify your expressions.

[3]



Working space:

.....

.....

.....

.....

A regular polygon has exterior angles of 45° .

- (a) How many sides does this polygon have? [2]

.....

.....

.....

- (b) Each side of this regular polygon is 7 cm.
A sketch of two sides, AB and BC , of the polygon is shown below.

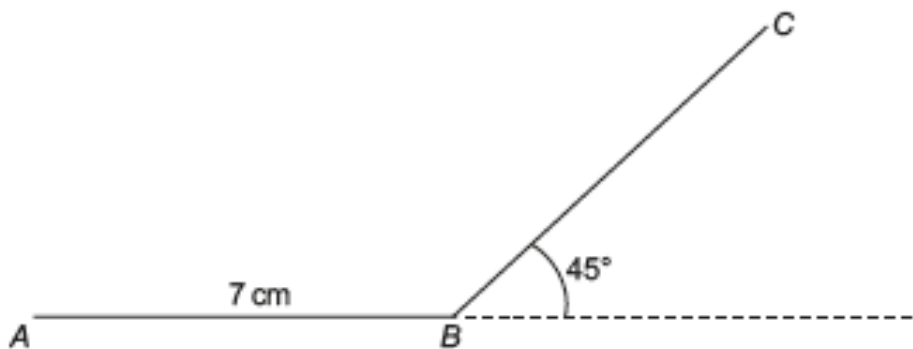



Diagram not drawn to scale

Using only a ruler and a pair of compasses, construct an accurate drawing that shows these two sides of the polygon.
The point A has been given.
You must show your construction arcs.

[4]

A •

Using only a ruler and a pair of compasses, construct a perpendicular line from the point P to the line AB . [3]



Construct an accurate drawing of triangle ABC , where $AB = 7$ cm, $\hat{A}BC = 90^\circ$ and $\hat{B}AC = 60^\circ$.
Use only a ruler and a pair of compasses.
The side AB has been drawn for you.
You must show your construction arcs.

[3]



WJEC INTERMEDIATE TIER FACTORISING WORKSHEET

(a) Make m the subject of the formula $y = 6m + 7$.

[2]

.....

.....

.....

.....

(b) Factorise $6x^2 - 12x$.

[2]

.....

Factorise $x^2 - 7x - 18$, and hence solve $x^2 - 7x - 18 = 0$.

[3]

.....

.....

.....

.....

.....

.....

.....

.....

.....

(a) Factorise $x^2 - 2x - 24$, and hence solve $x^2 - 2x - 24 = 0$.

[3]

.....

.....

.....

.....

.....

.....

.....

.....

.....

.....

(b) Solve the equation $\frac{4x-3}{2} + \frac{7x+1}{6} = \frac{29}{2}$.

[4]

.....

.....

.....

.....

.....

.....

.....

.....

.....

.....

.....

.....

.....

.....

.....

.....

.....

.....

.....

.....

.....

.....

.....

(a) Factorise $x^3 - 5x$. [1]

.....

(b) Expand and simplify $(2x - 3)(x + 4)$. [2]

.....

.....

.....

(c) Factorise $x^2 - 3x - 28$. [2]

.....

.....

.....

WJEC INTERMEDIATE TIER INEQUALITIES WORKSHEET

William has n marbles.

Lois had 4 times as many marbles as William, but she has now lost 23 of them.

Lois still has more marbles than William.

Write down an inequality in terms of n to show the above information.

Use your inequality to find the least number of marbles that William may have.

[4]

.....

.....

.....

.....

.....

.....

.....

.....

.....

.....

.....

.....

.....

.....

.....

Rashid owned n sheep.
Eifion had exactly 4 times as many sheep as Rashid.

Rashid buys 17 extra sheep.
Eifion sells 8 of his sheep.

Eifion still has more sheep than Rashid.

Form an inequality, in terms of n .
Solve the inequality to find the **least** value of n .
You must show all your working.

[5]

.....

.....

.....

.....

.....

.....

.....

.....

.....

.....

A shop has 31 plant pots.
Some are blue, some are yellow and the rest are red.
There are five more blue pots than yellow pots.
There are four times as many blue pots as there are red pots.

Calculate how many pots there are of each colour.

[3]

.....

.....

.....

.....

.....

.....

.....

.....

.....

.....

Blue

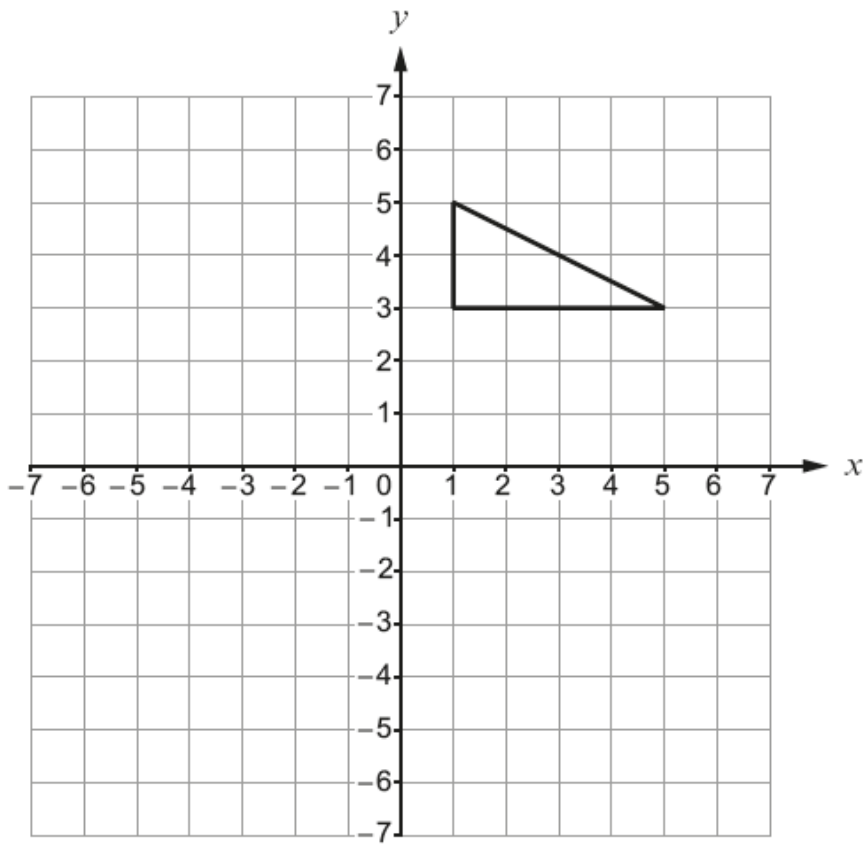
Yellow

Red

S J H S

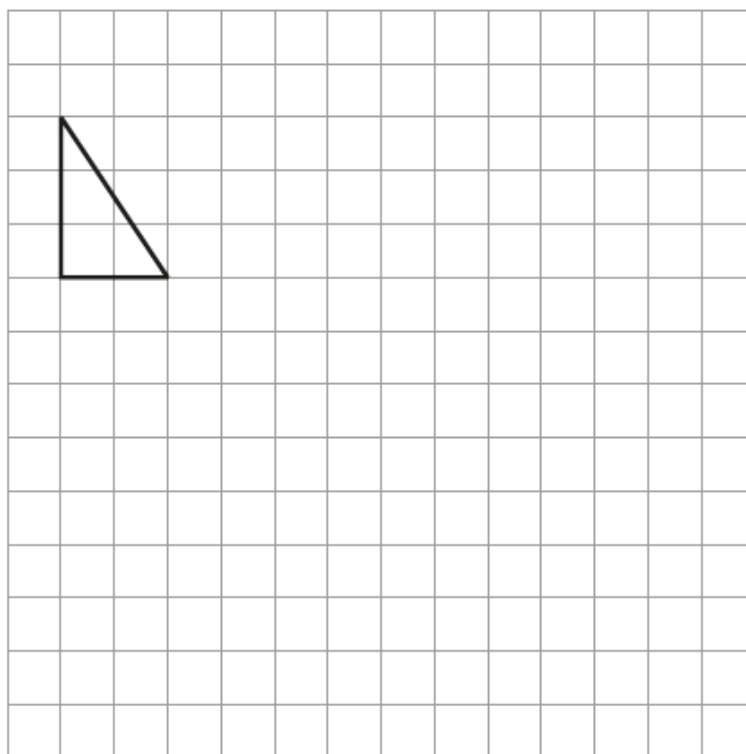
(a) Reflect the triangle below in the x -axis.

[1]



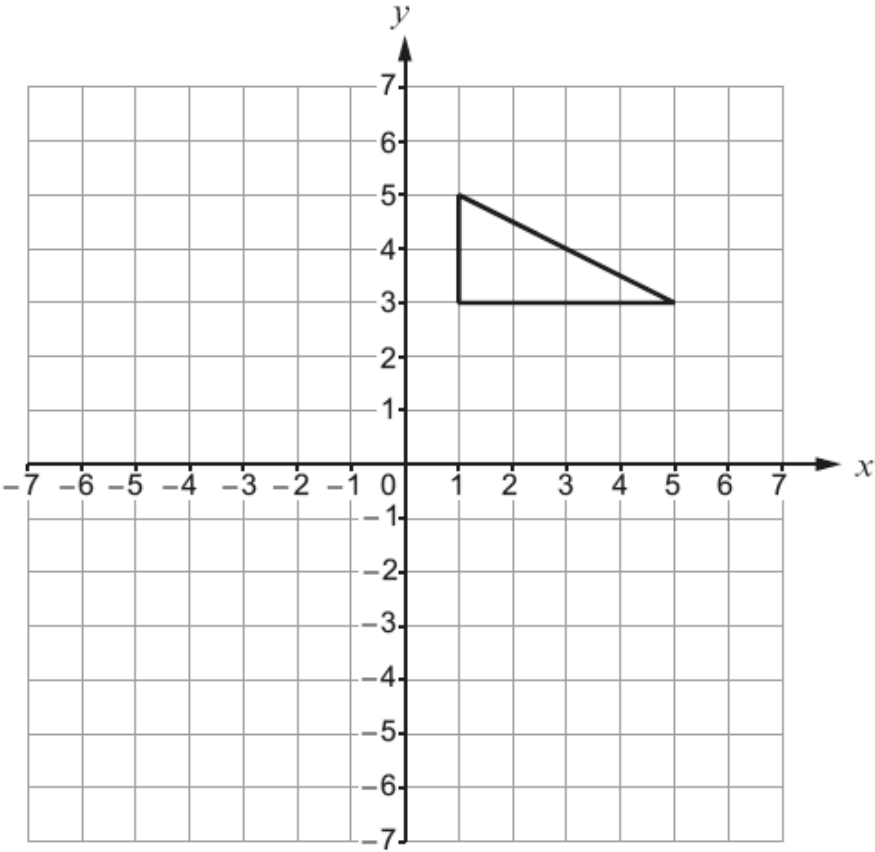
(b) Enlarge the triangle below by a scale factor of 3.

[2]



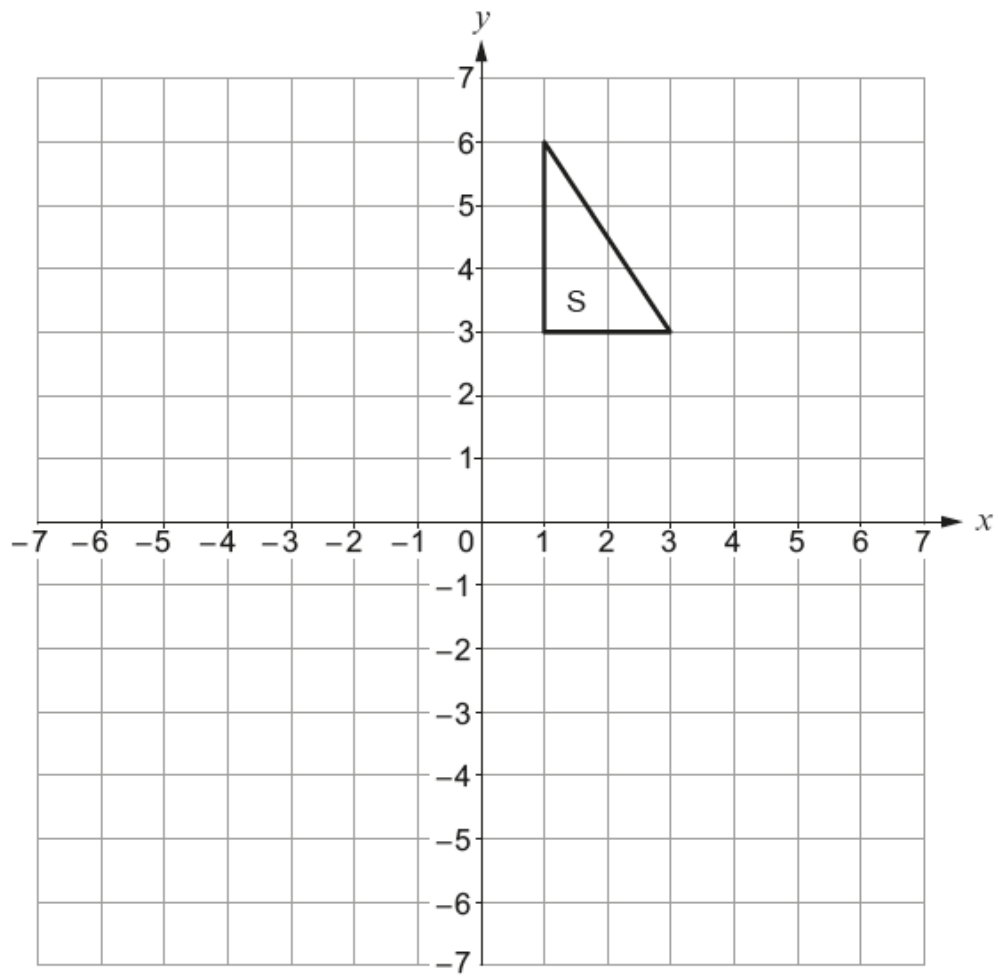
(c) Translate the triangle below 3 squares to the left and 2 squares down.

[1]

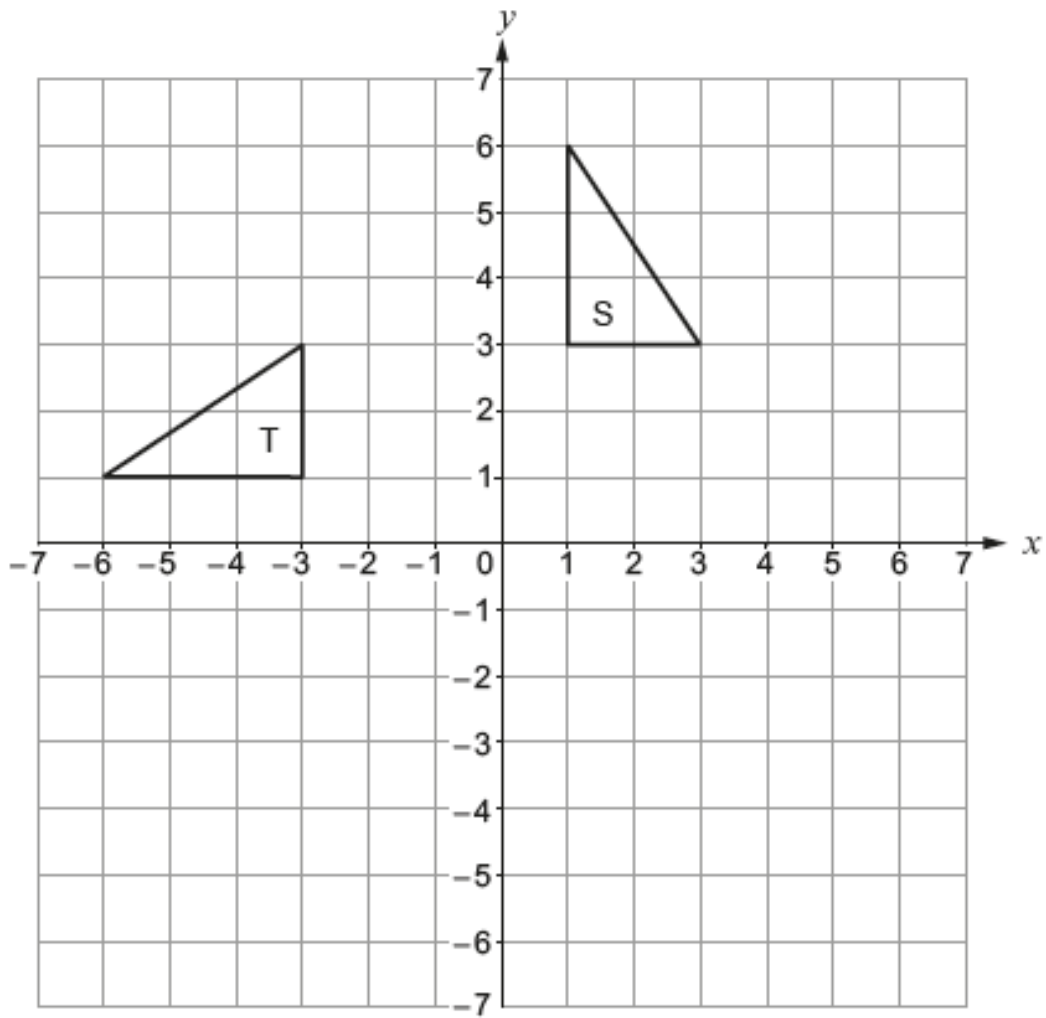


(a) Reflect the triangle S in the line $y = 2$.

[2]



(b) Describe fully a single transformation that transforms triangle S onto triangle T. [3]



.....

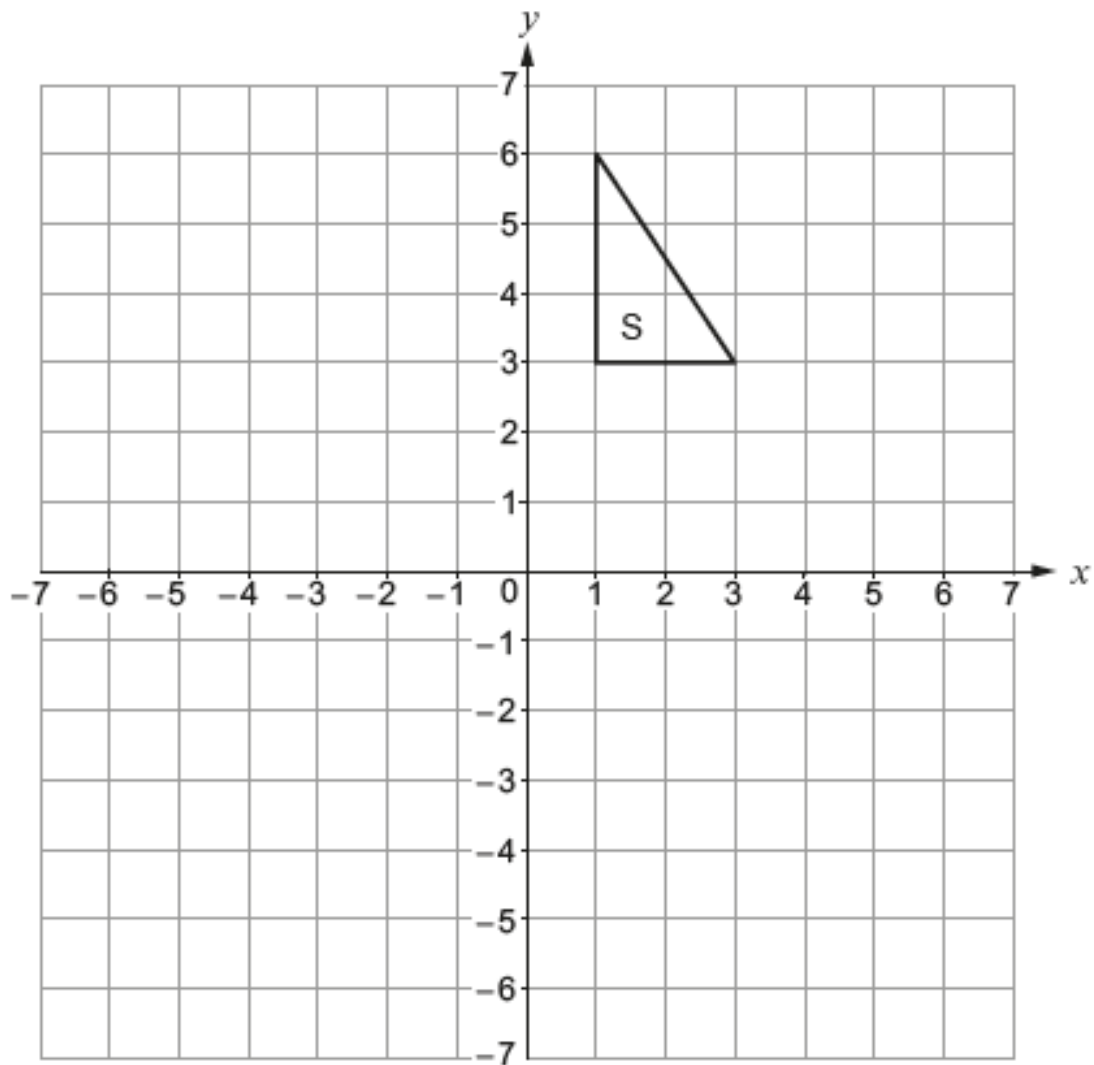
.....

.....

.....

- (c) (i) Translate the triangle S using the column vector $\begin{pmatrix} -5 \\ -4 \end{pmatrix}$.

[1]



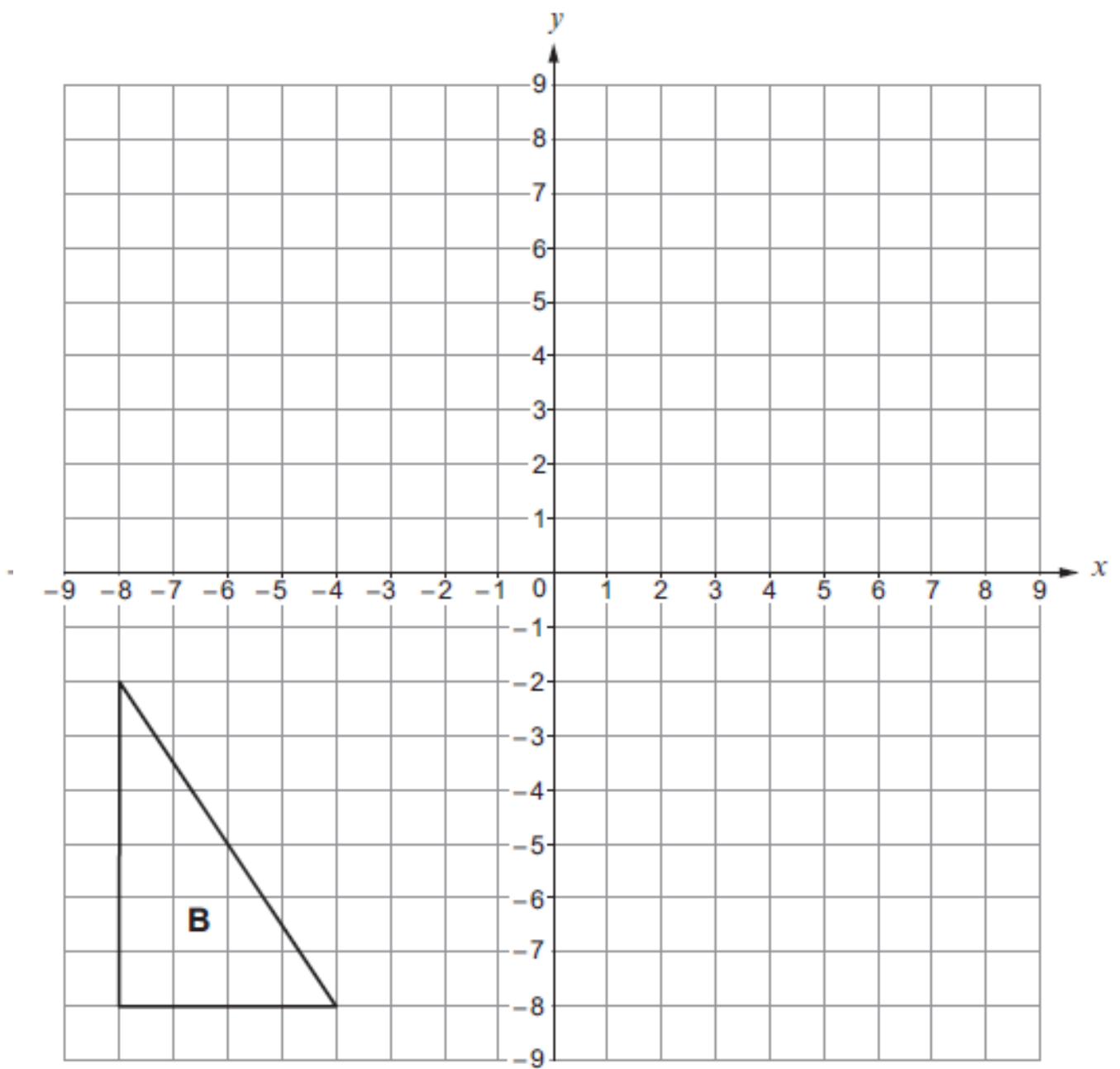
- (ii) Write down the column vector that will reverse the translation in part (i).

[1]

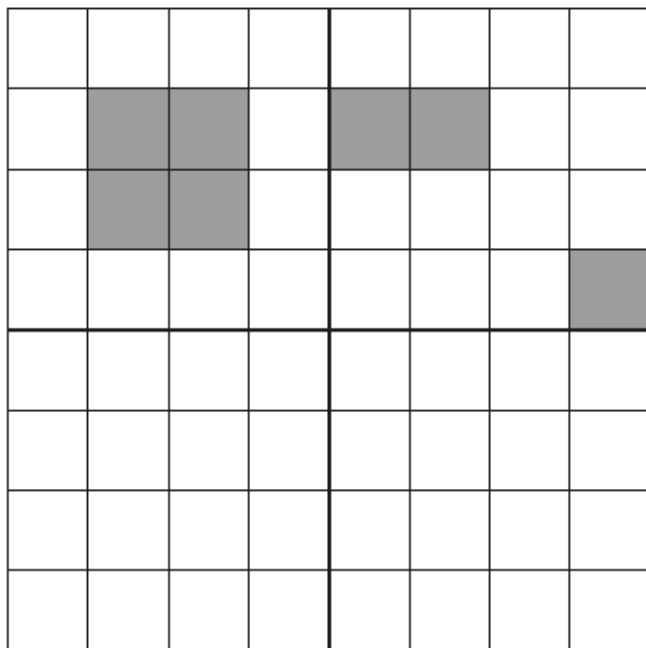
.....

SJHS

- (b) Enlarge triangle B by a scale factor of $\frac{1}{2}$, using $(0, 0)$ as the centre of enlargement. [2]



Shade the least number of squares in the lower two quadrants so that the grid has rotational symmetry of order 2. [3]



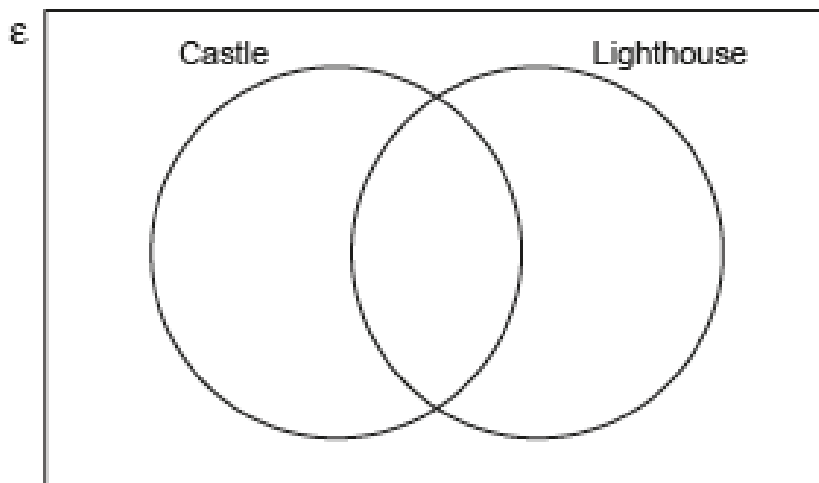
WJEC INTERMEDIATE TIER VENN DIAGRAMS WORKSHEET

A group of 20 people visited Anglesey for a weekend break.

- 10 of the group visited Beaumaris Castle.
- 13 of the group visited South Stack Lighthouse.
- 4 of the group did not visit either of these places.

- (a) Complete the Venn diagram below to show this information.
The universal set, ϵ , contains all of the 20 people in the group.

[3]



.....

.....

.....

.....

- (b) One person is chosen at random from the group.
What is the probability that this person visited only one of the two places?

[2]

.....

.....

.....

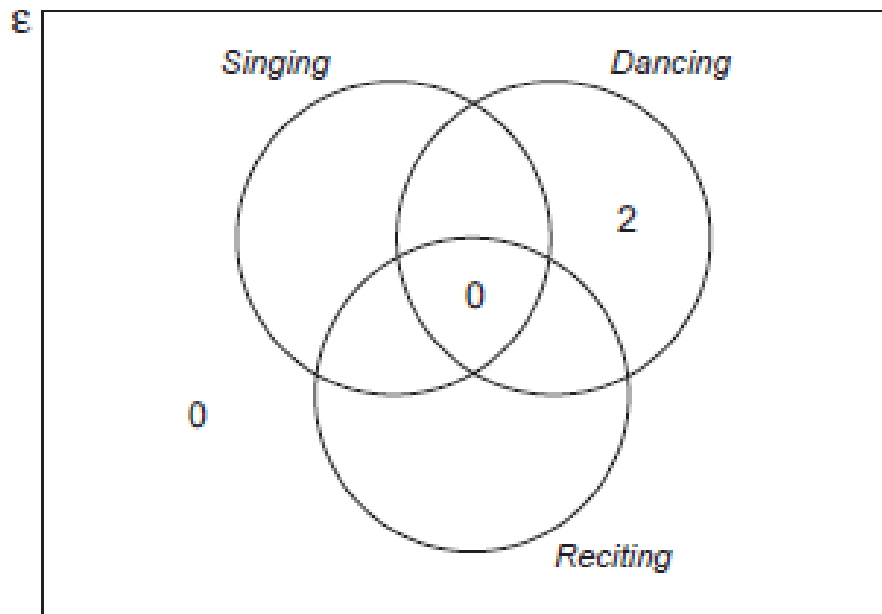
S J H S

A group of pupils from a school took part in The Urdd National Eisteddfod. All of them competed in at least one of the following competitions: *Singing*, *Dancing* or *Reciting*.

- 2 of them only took part in a *Dancing* competition.
- 5 only took part in a *Reciting* competition.
- No one took part in both a *Reciting* and a *Dancing* competition.
- 3 took part in both a *Singing* and a *Dancing* competition.
- 9 took part in a *Reciting* competition.
- 22 took part in a *Singing* competition.

The Venn diagram below shows some of the above information. The universal set, \mathcal{E} , contains all of the pupils in the group.

One of the pupils in the group is chosen at random. What is the probability that this person only took part in a *Singing* competition? [5]



.....

.....

.....

.....

.....

.....

S J H S

At a college, a total of 28 students study one or more of the science subjects: Biology, Chemistry and Physics.

The 28 students form the universal set, ϵ .

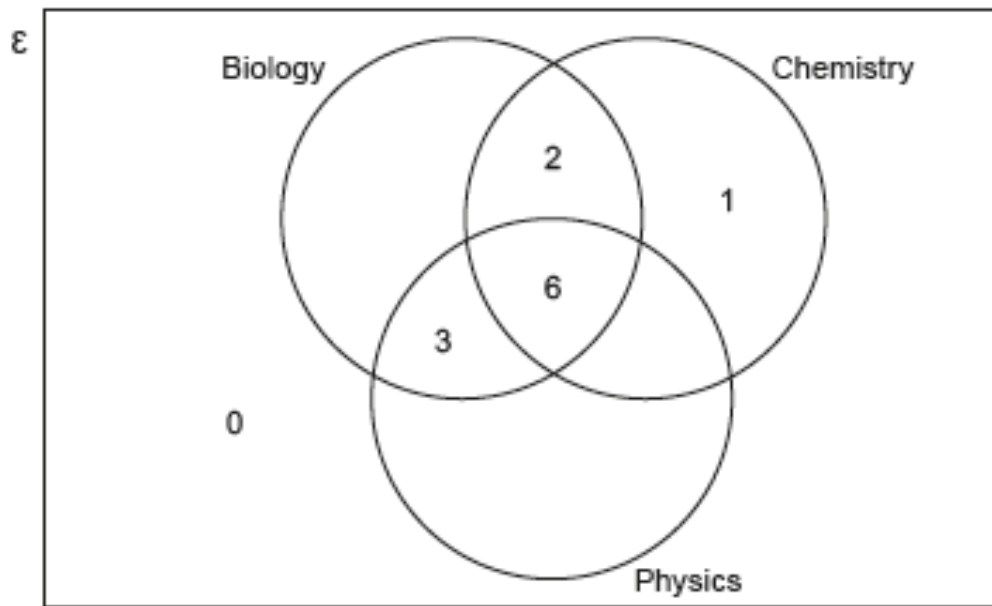
Some parts of the Venn diagram below have already been completed.

It is also known that:

- 5 students study only Biology
- 13 students study Chemistry

(a) Complete the Venn diagram.

[3]



.....

.....

.....

.....

(b) How many students study Biology and Chemistry but not Physics?

[1]

.....

(c) One of the students is chosen at random.
What is the probability that this student studies Biology?

[2]

.....

.....

WJEC INTERMEDIATE TIER FUNCTION MACHINES WORKSHEET

(a) Solve the equation $3x - 2 = 10$.

[2]

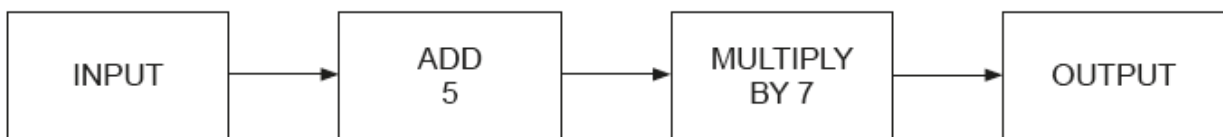
.....

.....

.....

.....

(b) A number machine is shown below.



(i) Calculate the OUTPUT when the INPUT is -2 .

[1]

.....

.....

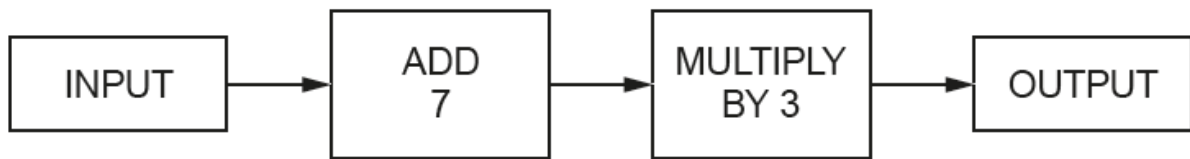
(ii) Write down an expression for the OUTPUT when the INPUT is n .

[2]

.....

.....

The diagram below shows a number machine.



Using the number machine, calculate:

(a) the INPUT when the OUTPUT is 36,

[1]

.....

.....

(b) the OUTPUT when the INPUT is n .

[2]

.....

.....

WJEC INTERMEDIATE TIER INDEX LAWS WORKSHEET

Circle the correct answer for each of the following.

(a) $x^3 \times x^6 =$ [1]

x^{36}

$x^{0.5}$

x^2

x^9

x^{18}

.....

(b) $(7x - 5y) - (3x + 2y) =$ [1]

$4x - 3y$

$4x - 7y$

$4x + 3y$

$-4x + 7y$

$-4x - 7y$

.....

.....

(c) A car travels x miles in 30 minutes.
Its average speed in miles per hour is [1]

$\frac{x}{2}$

$\frac{x}{30}$

$2x$

$\frac{2}{x}$

$30x$

.....

.....

Simplify each of the following and circle the correct answer in each case.

(a) $6p^6 \times 3p^3$ [1]

$9p^9$

$9p^{18}$

$18p^{18}$

$18p^2$

$18p^9$

(b) $3.4g^8 \div 13.6g^2$ [1]

$\frac{g^4}{4}$

$\frac{g^6}{4}$

$4g^4$

$4g^6$

$0.4g^6$

(c) $\frac{m^3 \times m^6}{m^9}$ [1]

1

m

m^2

m^4

4

S

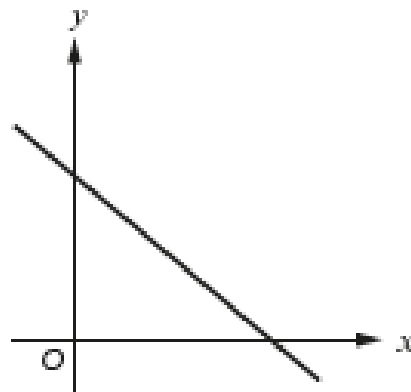
J

H

S

WJEC INTERMEDIATE TIER STRAIGHT LINE GRAPHS WORKSHEET

(a)



Which one of the following equations could represent the line shown in the graph above?
Circle your answer. [1]

- $y = -x - 2$ $y = -x + 2$ $y = x + 2$ $y = x - 2$ $y = -x$.

(b) Which one of the following points lies on the line $2y = 3x + 4$?
Circle your answer. [1]

- (2, -5) (5, 2) (-2, 5) (2, 5) (-2, -5)

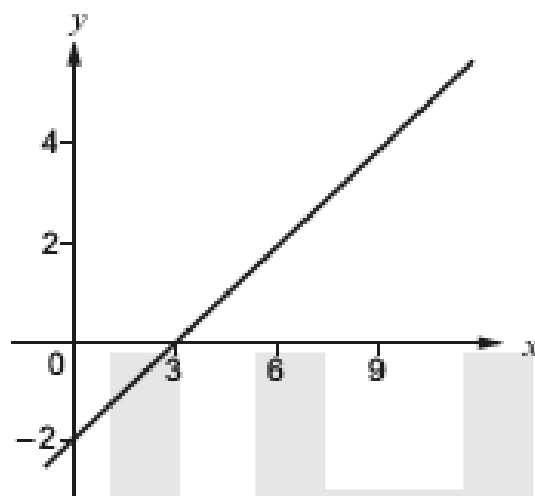
.....

.....

.....

.....

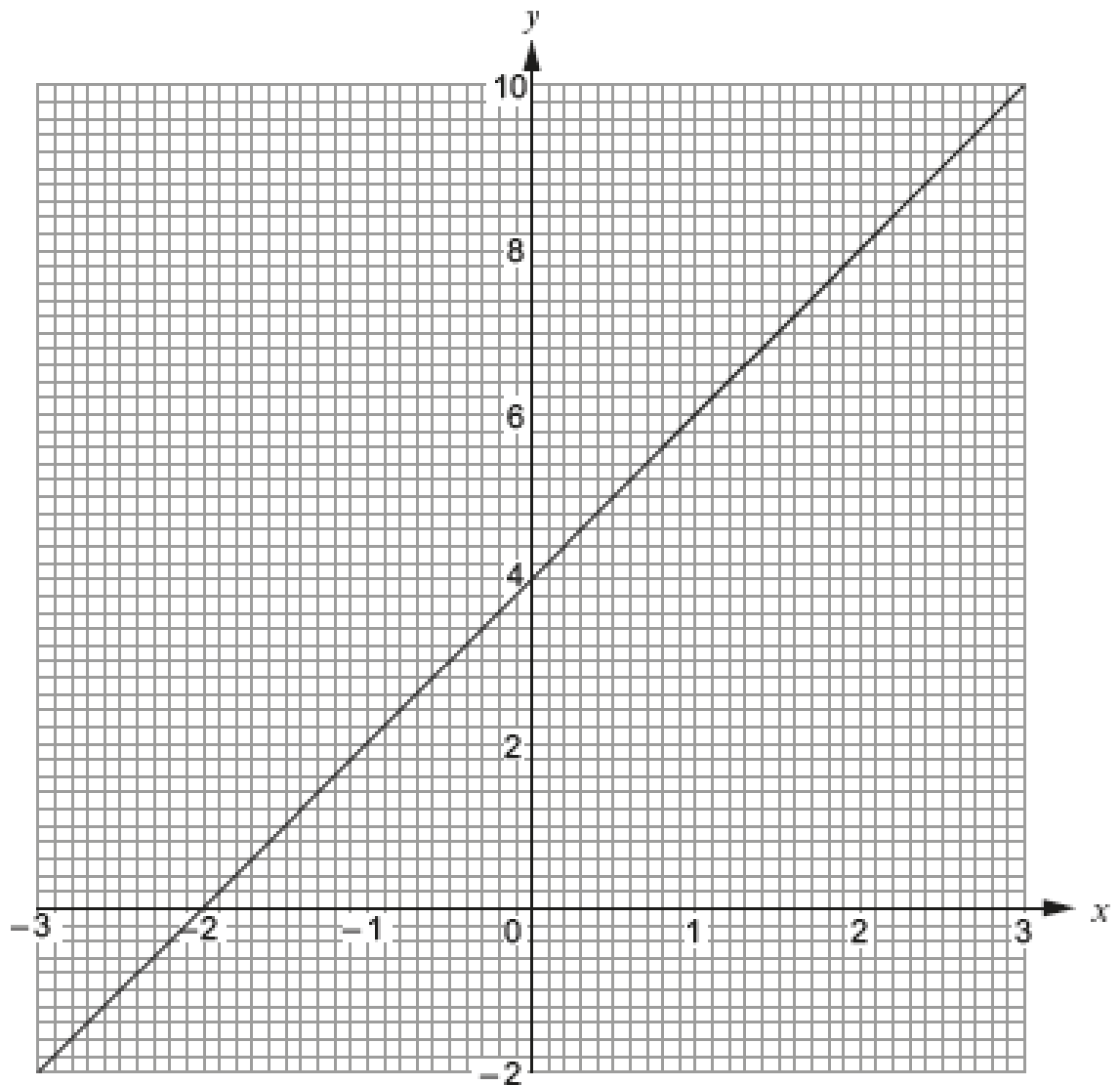
(c)



What is the gradient of the line shown in the graph above?
Circle your answer. [1]

- $\frac{3}{2}$ $-\frac{3}{2}$ $\frac{2}{3}$ $-\frac{2}{3}$ -6

- (a) The diagram below shows the graph of a straight line for values of x from -3 to 3 .



- (i) Write down the gradient of the above line. [1]

- (ii) Write down the equation of the line in the form $y = mx + c$, where m and c are whole numbers. [2]

- (b) Without drawing, show that the line $2y = 5x - 3$ is parallel to the line $4y = 10x + 7$. You must show working to support your answer. [2]

19. (a) Circle the equation of a straight line that is parallel to the line $3y = 2x + 6$. [1]

$3y = 2x + 7$

$2y = 3x + 6$

$3y = -2x + 6$

$-3y = 2x + 6$

$2y = -3x + 6$

.....
.....

(b) Circle the equation of a straight line that is perpendicular to the line $y = 5x - 3$. [1]

$y = \frac{x}{5} + 3$

$y = 5x + 3$

$y = 5x + \frac{1}{3}$

$y = -5x + 3$

$y = \frac{-x}{5} + 3$

.....

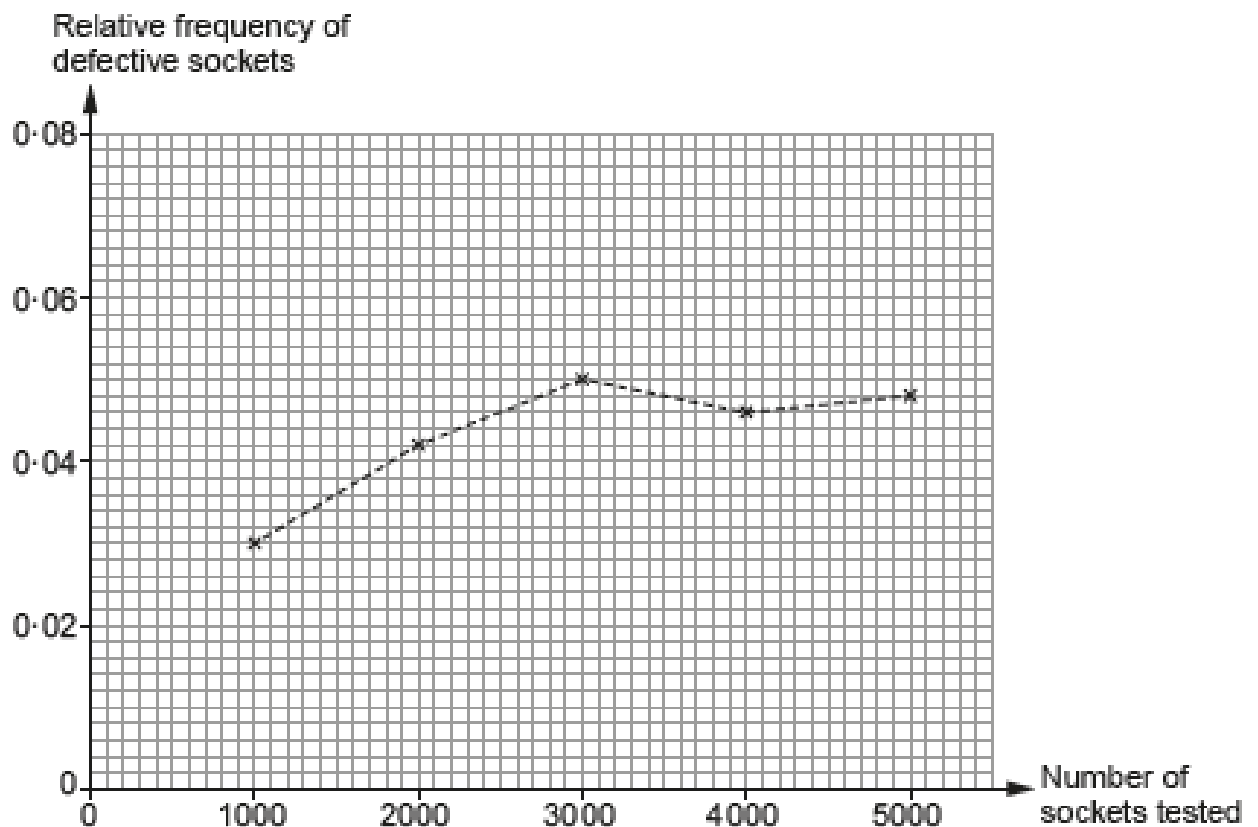
WJEC INTERMEDIATE TIER RELATIVE FREQUENCY WORKSHEET

A factory uses a machine to produce electrical sockets.

The manager carries out a survey to investigate the probability of the machine producing a defective socket.

The relative frequency of defective sockets produced was calculated after testing a total of 1000, 2000, 3000, 4000 and 5000 sockets.

The results are plotted on the graph below.



- (a) How many of the first 3000 sockets tested were defective? [2]

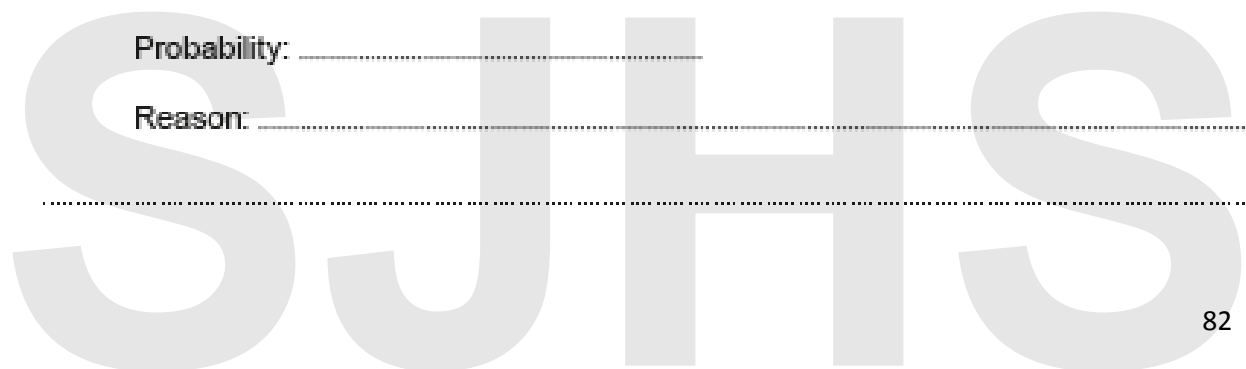
.....

.....

- (b) Write down the best estimate for the probability that one socket, selected at random, will be defective. You must give a reason for your choice. [2]

Probability:

Reason:



A dice is thrown 50 times.
 The number shown on the dice is recorded after each throw.
 The table below shows the results recorded.

Number shown on dice	1	2	3	4	5	6
Frequency	9	7	8	7	6	13

(a) The relative frequency of throwing a 1 was calculated as $\frac{9}{50} = 0.18$.

What was the relative frequency of throwing a 6?
 Give your answer as a decimal.

[1]

.....

.....

.....

(b) The number 4 was thrown 7 times in the first 50 throws.
 Using this fact, calculate how many times you would expect a 4 to be thrown when this dice is thrown 3000 times.

[2]

.....

.....

.....

(c) How many times would you expect a 4 to be thrown when a fair dice is thrown 3000 times?

[2]

.....

.....

.....

WJEC INTERMEDIATE TIER CIRCLE THEOREM WORKSHEET

PQ and PR are tangents to a circle with centre O .
 $\hat{RPQ} = 30^\circ$.

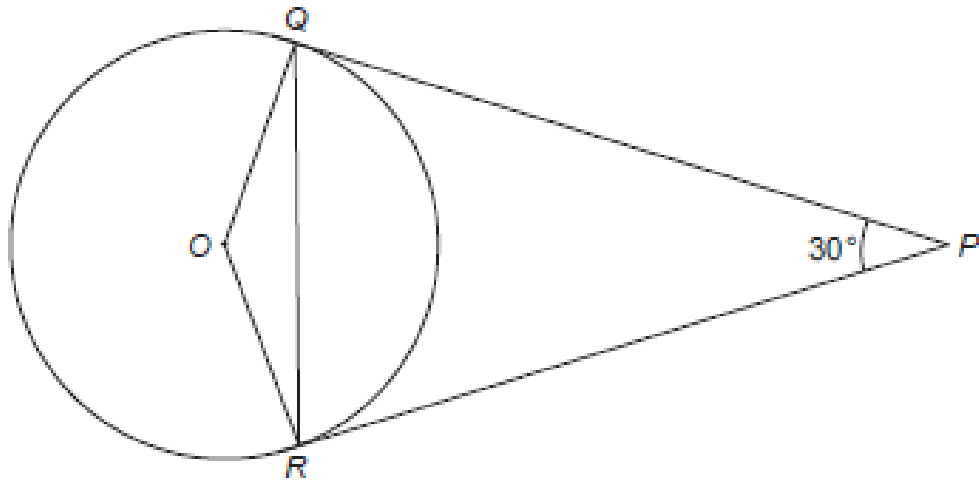


Diagram not drawn to scale

Find the size of \hat{OQR} .

You must indicate any angles you calculate.
You must give a reason for each stage of your working.

[5]

.....

.....

.....

.....

.....

.....

.....

.....

Points A , B , C and D lie on the circumference of a circle, centre O .
 BD is a diameter of the circle.
 The straight line $BC = 4.7$ cm and $\widehat{BAC} = 28^\circ$.

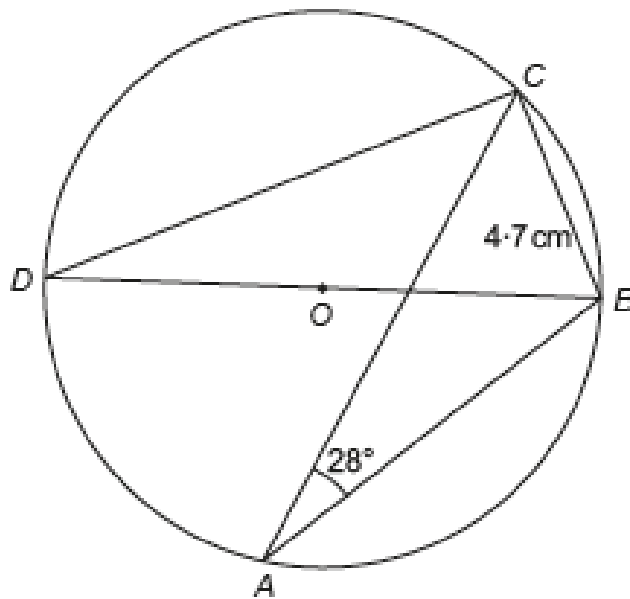


Diagram not drawn to scale

Write down the size of \widehat{BDC} .
 Hence, calculate the length BD .
 You must show all your working.

[5]

.....

.....

.....

.....

.....

.....

.....

.....

Points A , B and C lie on the circumference of a circle, centre O .
 $\widehat{ACB} = 37^\circ$.

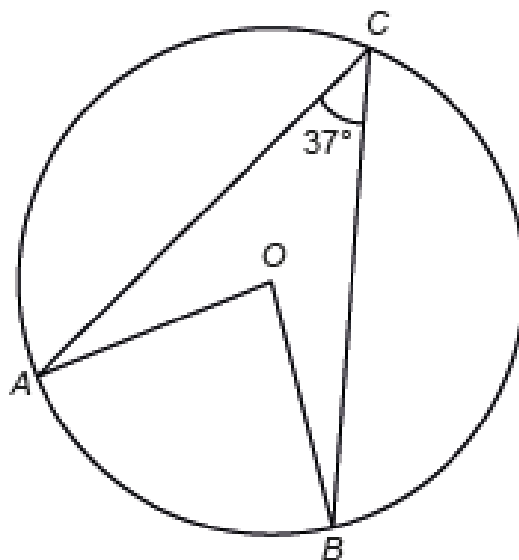


Diagram not drawn to scale

Calculate the size of the reflex angle \widehat{AOB} .

[2]

.....

.....

.....

Show clearly whether the following statement is true or false.

[4]

'If you increase a positive number by 10% and then decrease that new value by 10%, you get back to your original number.'

.....

.....

.....

.....

.....

.....

.....

.....

.....

.....

.....

.....

.....

.....

.....

.....

(a) Calculate 39% of £576. [2]

.....

.....

.....

(b) Calculate $\frac{3}{7}$ of 100. [2]
Give your answer correct to the nearest whole number.

.....

.....

.....

(c) How many quarters are there in 10? [1]

.....

.....

.....

(d) What fraction is equal to 50% of $\frac{1}{6}$? [1]

.....

.....

.....

(e) Circle the fraction that is a recurring decimal. [1]

$$\frac{21}{35}$$

$$\frac{10}{12}$$

$$\frac{17}{68}$$

$$\frac{15}{24}$$

$$\frac{51}{170}$$

.....

.....

.....

(a) Calculate 8% of £3.25.

[3]

.....

.....

.....

(b) Evaluate $0.65 \times 280 - \frac{2}{9}$ of 513.

[3]

.....

.....

.....

.....

.....

(c) Calculate $3.5^2 - \sqrt{8.6}$.

Give your answer correct to 2 decimal places.

[2]

.....

.....

.....

(a) Express 54 as a percentage of 129.
Give your answer to the nearest whole number.

[3]

.....

.....

.....

.....

.....

(b) Share 25.8 kg in the ratio 5 : 1.

[2]

.....

.....

.....

.....

.....

..... kg and kg

Write down five numbers that satisfy all of the following conditions:

- They are all between 1 and 9 inclusive.
- They have a median value of 6.
- They have a range of 7.
- Their mean is 5.

[3]

.....

.....

.....

.....

.....

--	--	--	--	--

Write down three integers, all less than 25, whose

- range is 8, and
- mean is 13.

[2]

.....

.....

.....

.....

The three integers are _____, _____ and _____

S J H S

(a)

11	23	5	9	18	20	
----	----	---	---	----	----	--

A number is to be written on the blank card.

The mode and the median of all seven numbers are both the same.

Find one possible number that can be written on the blank card.

[1]

.....

.....

.....

.....

Number on card

(b) One extra number is added to the following list of three numbers.

6 8 13

The mean of the new list of four numbers is 1 less than the mean of the original three numbers.

What number was added to the list?

[4]

.....

.....

.....

.....

.....

.....

.....

Number added

WJEC INTERMEDIATE TIER PYTHAGORAS' THEOREM WORKSHEET

A right-angled triangle LMN is shown below.
 $LN = 16.9$ cm and $LM = 6.5$ cm.

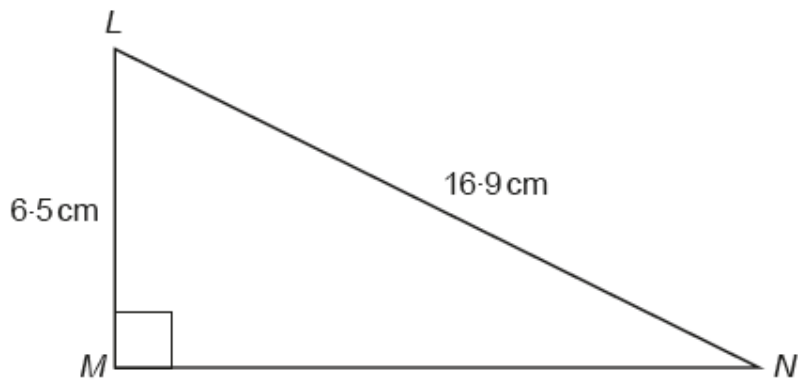


Diagram not drawn to scale

Calculate the length MN .

[3]

.....

.....

.....

.....

.....

.....

A triangular prism of length 2 metres is shown below.

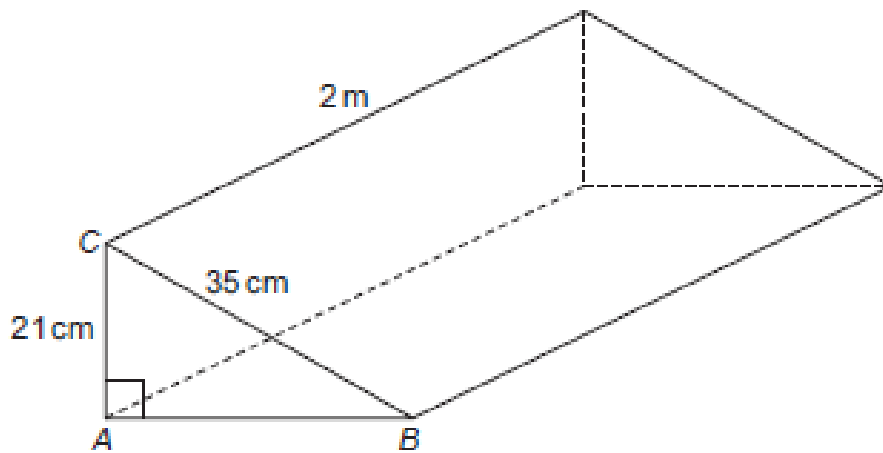


Diagram not drawn to scale

$AC = 21 \text{ cm}$, $BC = 35 \text{ cm}$ and $\hat{BAC} = 90^\circ$.

- (a) Calculate the area of triangle ABC .
Give your answer in cm^2 .
You must show all your working.

[5]

.....

.....

.....

.....

.....

.....

.....

.....

.....

.....

WJEC INTERMEDIATE TIER TREE DIAGRAMS WORKSHEET

Alwyn often drives from Bangor to Cardiff.
He always chooses one of two routes for these journeys.
He either travels through Rhayader or through Hereford.
The probability that he travels through Rhayader is 0.7.

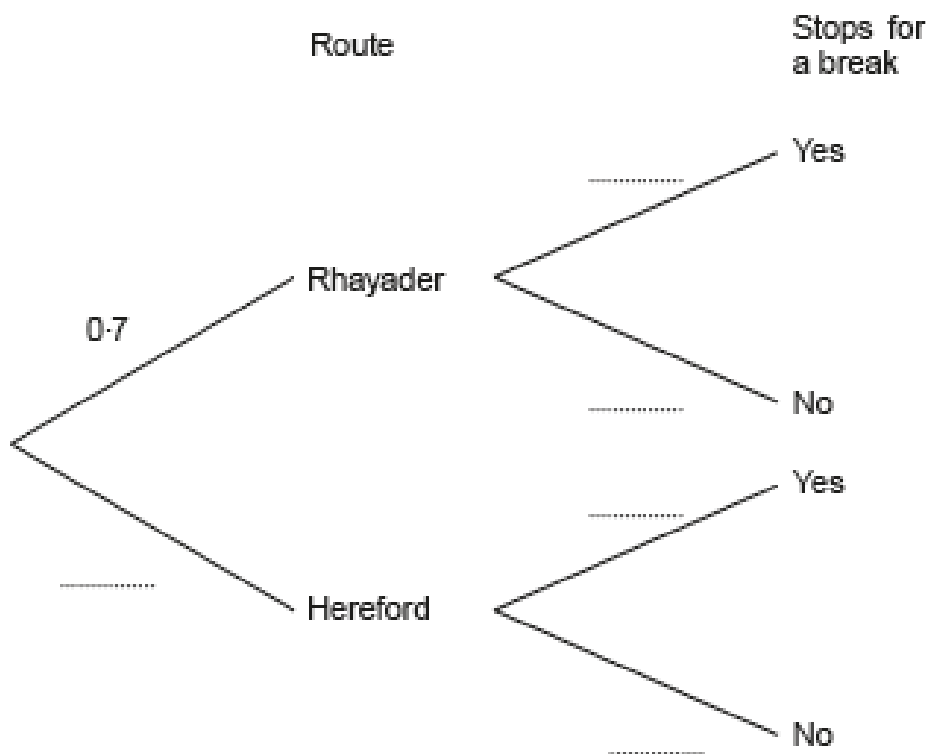
Sometimes he decides to stop for a break during his journey.
His decision is independent of the route he takes.

The probability that he travels through Rhayader and stops for a break is 0.42.

(a) Complete the following tree diagram. [4]

.....

.....



(b) Calculate the probability that Alwyn travels through Hereford but does not stop for a break. [2]

.....

.....

.....

7. 100 boxes each contain 10 balls.

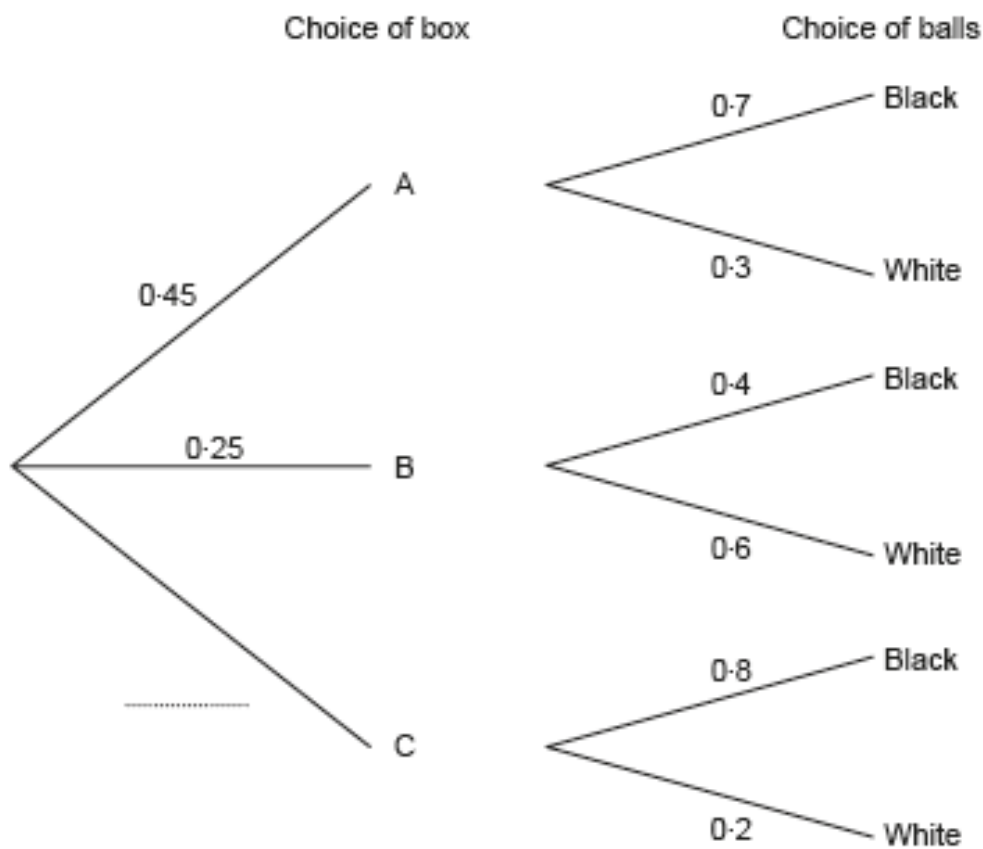
45 of the boxes are labelled A.
They each contain 7 black balls and 3 white balls.

25 of the boxes are labelled B.
They each contain 4 black balls and 6 white balls.

The rest of the boxes are labelled C.
They each contain 8 black balls and 2 white balls.

In a game, a player chooses a box at random, and then chooses a ball at random from that box.

(a) Complete the tree diagram shown below. [1]



(b) What is the probability that a player will select a black ball? [3]

.....

.....

.....

.....

.....

3. All the members of a farming club visited the Royal Welsh Agricultural Show. They all travelled to the show either by bus or by car. None of them visited the show on more than one day. The decision to travel by car or by bus was independent of the day of the visit.

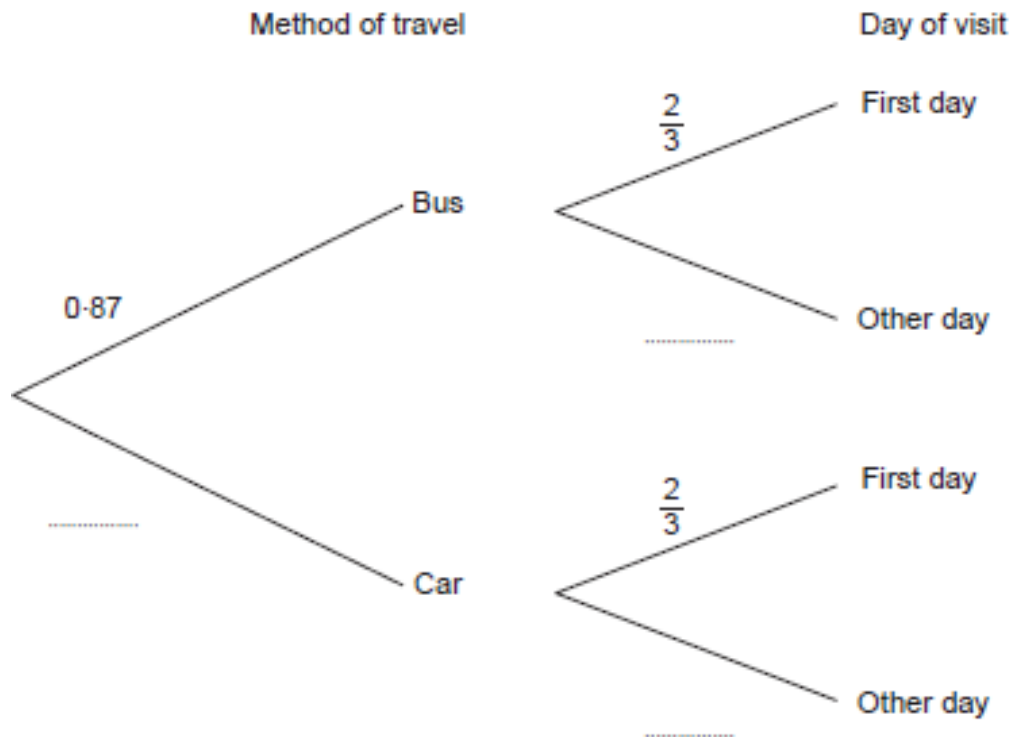
A member of the club was selected at random.

The probability that this member travelled by bus was 0.87.

The probability that this member visited the show on the first day was $\frac{2}{3}$.

- (a) Complete the tree diagram shown below.

[2]



- (b) What is the probability that a member, chosen at random, was not one of those who travelled by bus on the first day of the show? [3]

.....

.....

.....

.....

.....